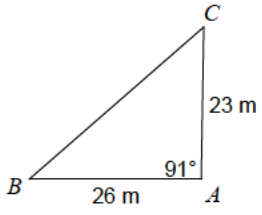


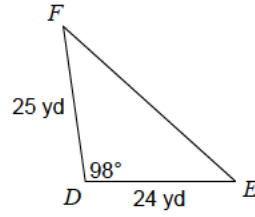
Trigonometry - The Law of Cosine

Find a missing side of a triangle. Use The Law of Cosine to help yourself.

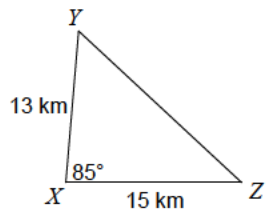
1) Find BC



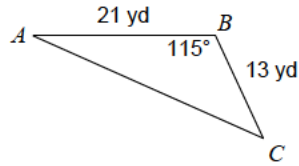
2) Find EF



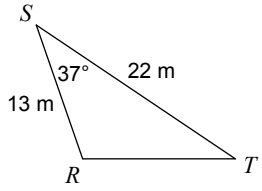
3) Find YZ



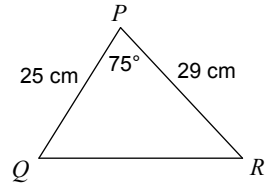
4) Find AC



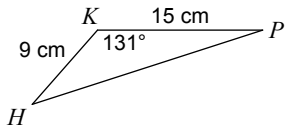
5) Find RT



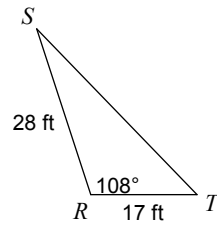
6) Find QR



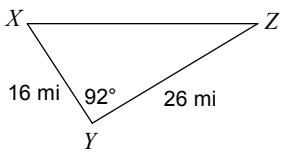
7) Find HP



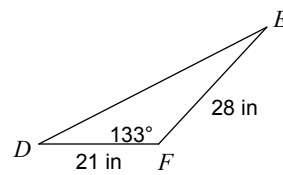
8) Find ST



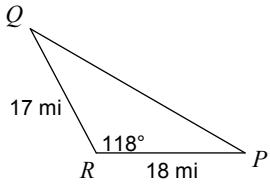
9) Find XZ



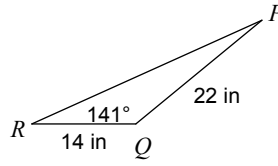
10) Find DE



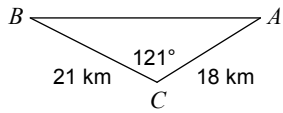
11) Find PQ



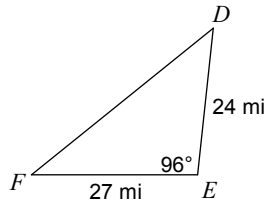
12) Find PR



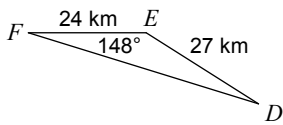
13) Find AB



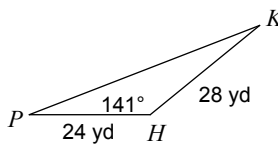
14) Find DF



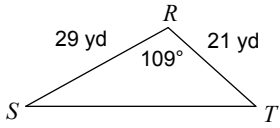
15) Find DF



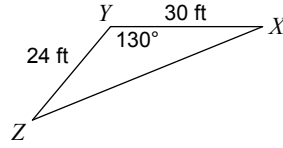
16) Find KP



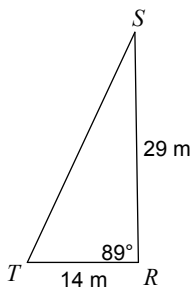
17) Find ST



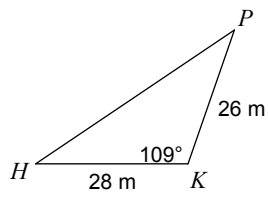
18) Find XZ



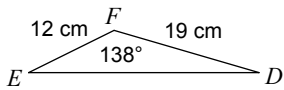
19) Find ST



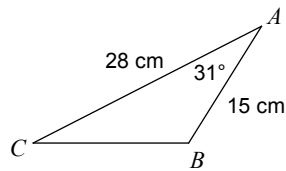
20) Find HP



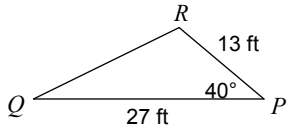
21) Find DE



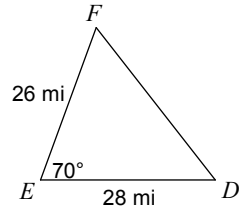
22) Find BC



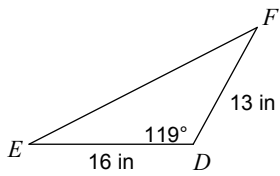
23) Find QR



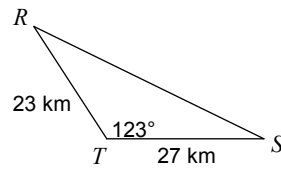
24) Find DF



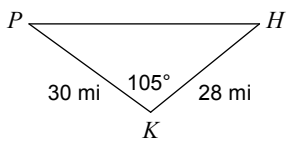
25) Find EF



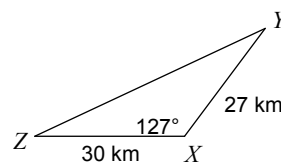
26) Find RS



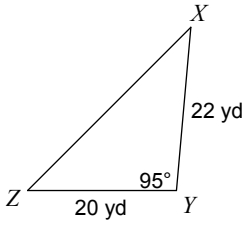
27) Find HP



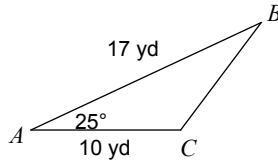
28) Find YZ



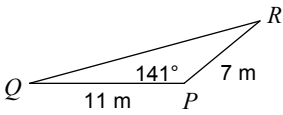
29) Find XZ



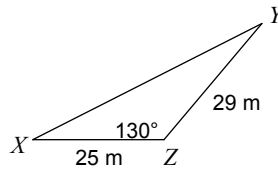
30) Find BC



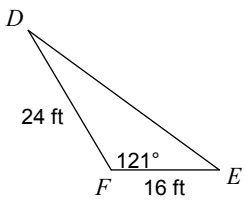
31) Find QR



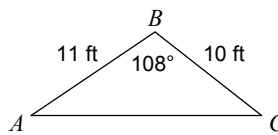
32) Find XY



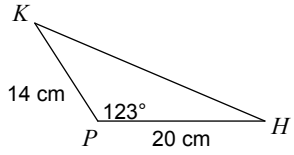
33) Find DE



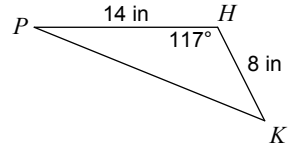
34) Find AC



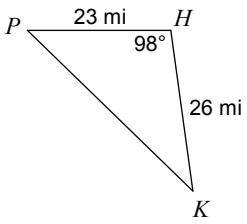
35) Find HK



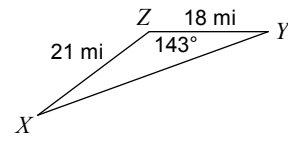
36) Find KP



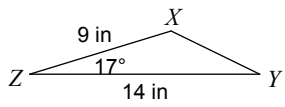
37) Find KP



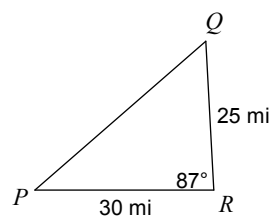
38) Find XY



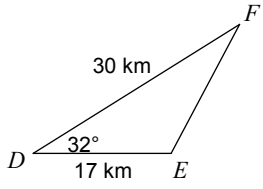
39) Find XY



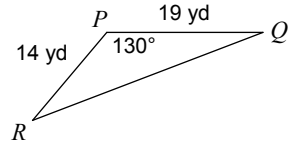
40) Find PQ



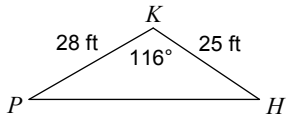
41) Find EF



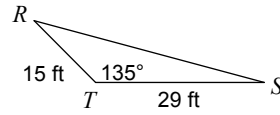
42) Find QR



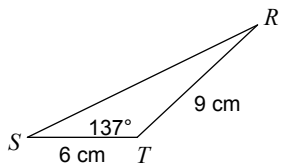
43) Find HP



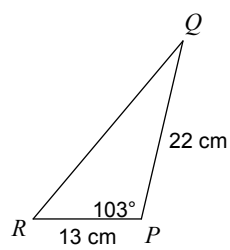
44) Find RS



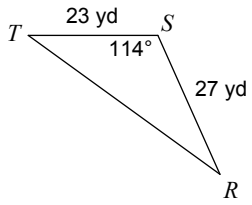
45) Find RS



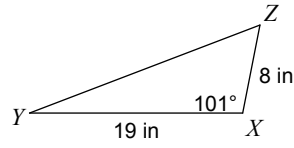
46) Find QR



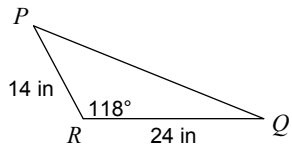
47) Find RT



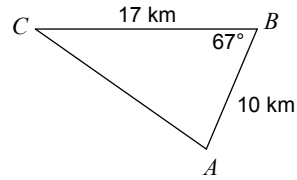
48) Find YZ



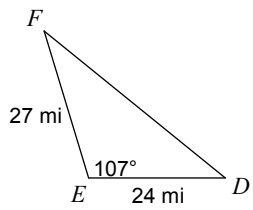
49) Find PQ



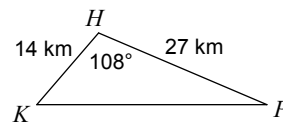
50) Find AC



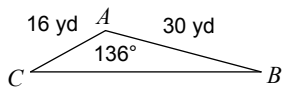
51) Find DF



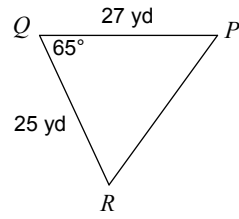
52) Find KP



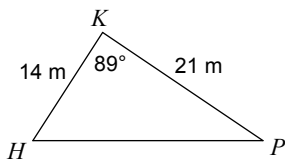
53) Find BC



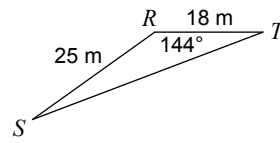
54) Find PR



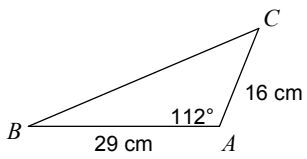
55) Find HP



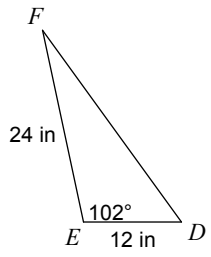
56) Find ST



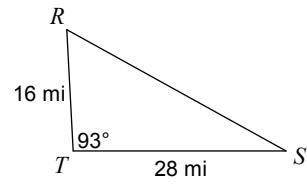
57) Find BC



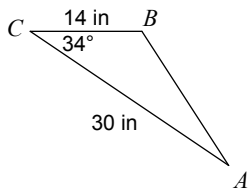
58) Find DF



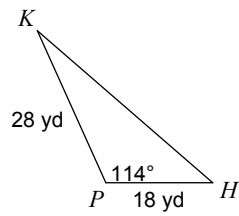
59) Find RS



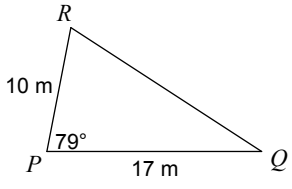
60) Find AB



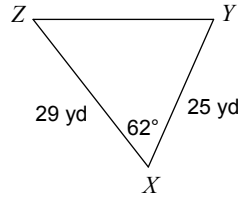
61) Find HK



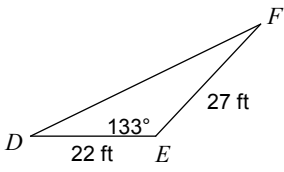
62) Find QR



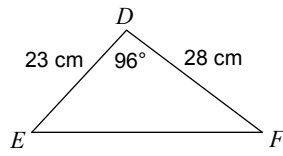
63) Find YZ



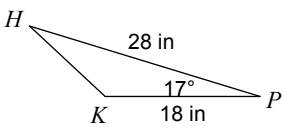
64) Find DF



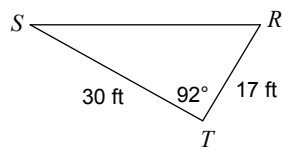
65) Find EF



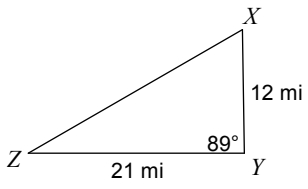
66) Find HK



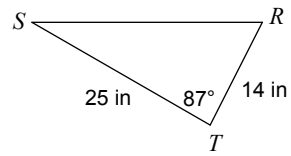
67) Find RS



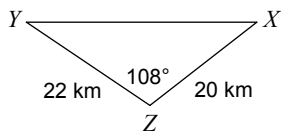
68) Find XZ



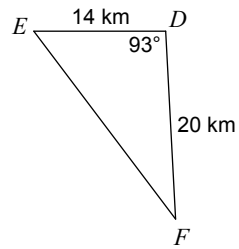
69) Find RS



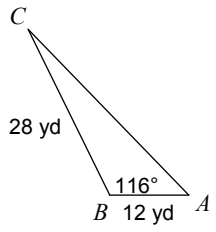
70) Find XY



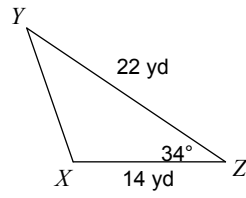
71) Find EF



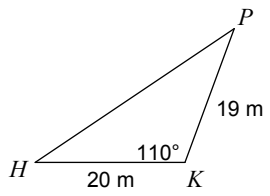
72) Find AC



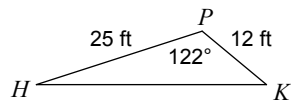
73) Find XY



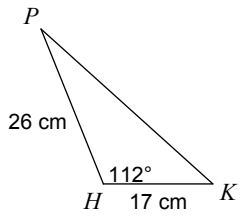
74) Find HP



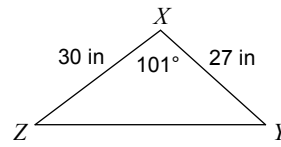
75) Find HK



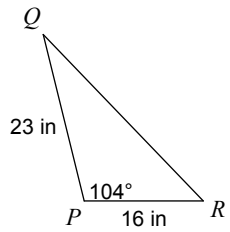
76) Find KP



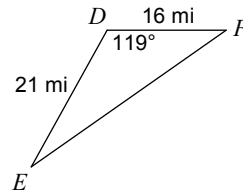
77) Find YZ



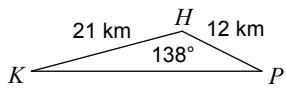
78) Find QR



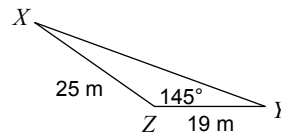
79) Find EF



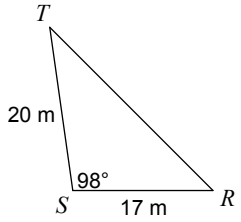
80) Find KP



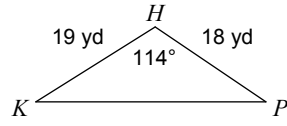
81) Find XY



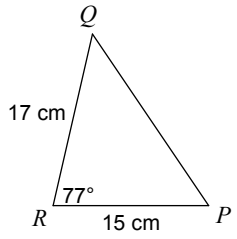
82) Find RT



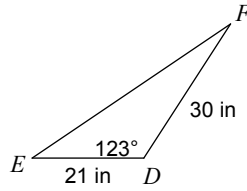
83) Find KP



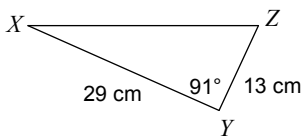
84) Find PQ



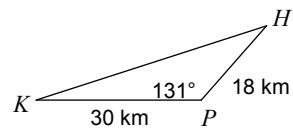
85) Find EF



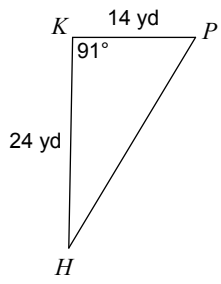
86) Find XZ



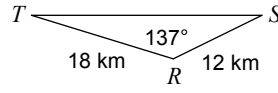
87) Find HK



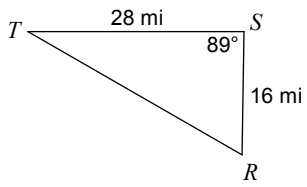
88) Find HP



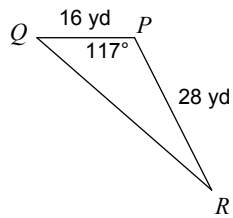
89) Find ST



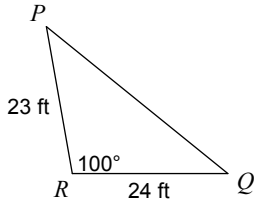
90) Find RT



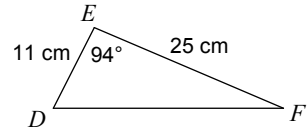
91) Find QR



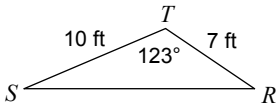
92) Find PQ



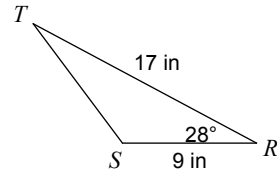
93) Find DF



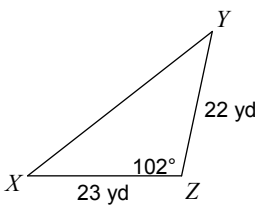
94) Find RS



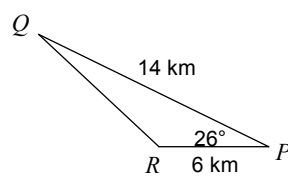
95) Find ST



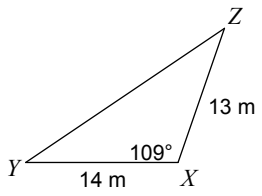
96) Find XY



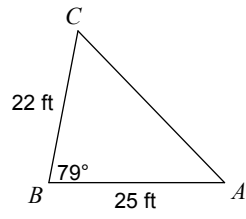
97) Find QR



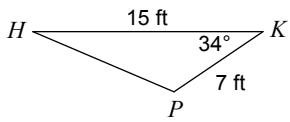
98) Find YZ



99) Find AC

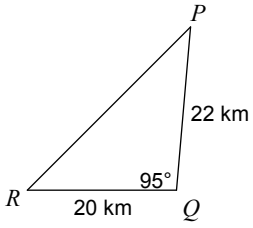


100) Find HP

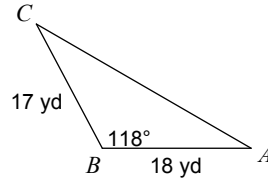


Find a missing angle of a triangle. Use The Law of Cosine to help yourself.

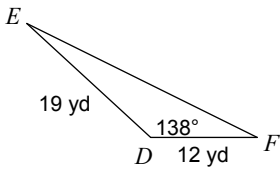
101) Find $m\angle R$



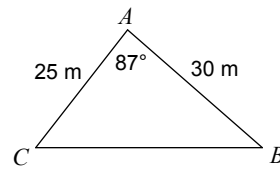
102) Find $m\angle C$



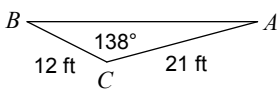
103) Find $m\angle E$



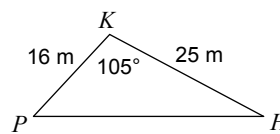
104) Find $m\angle B$



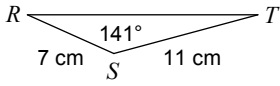
105) Find $m\angle A$



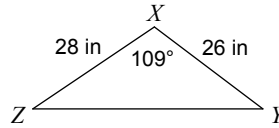
106) Find $m\angle H$



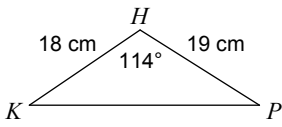
107) Find $m\angle T$



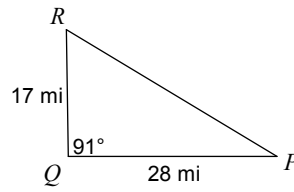
108) Find $m\angle Y$



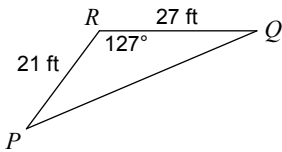
109) Find $m\angle P$



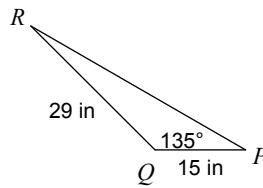
110) Find $m\angle R$



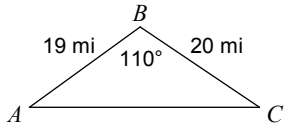
111) Find $m\angle P$



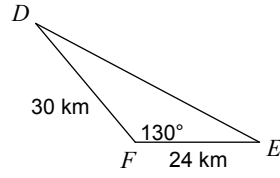
112) Find $m\angle R$



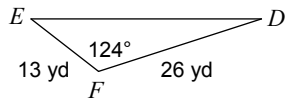
113) Find $m\angle C$



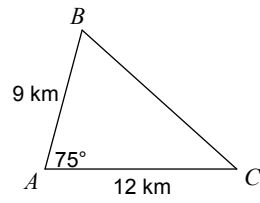
114) Find $m\angle D$



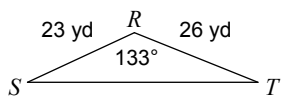
115) Find $m\angle D$



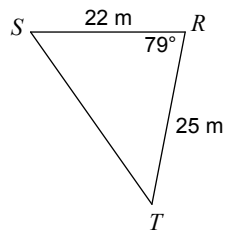
116) Find $m\angle B$



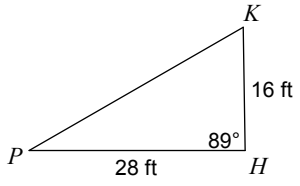
117) Find $m\angle S$



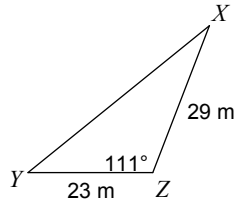
118) Find $m\angle S$



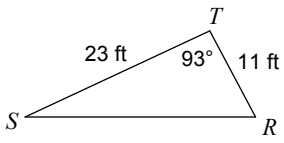
119) Find $m\angle P$



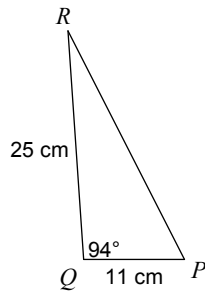
120) Find $m\angle X$



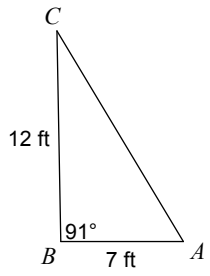
121) Find $m\angle R$



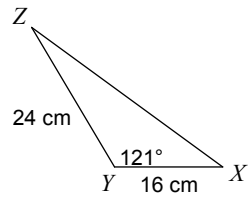
122) Find $m\angle R$



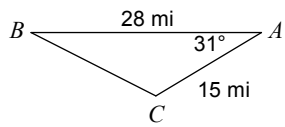
123) Find $m\angle C$



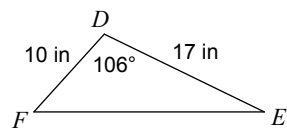
124) Find $m\angle Z$



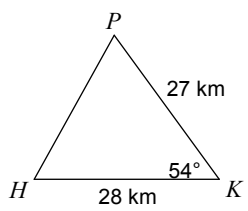
125) Find $m\angle B$



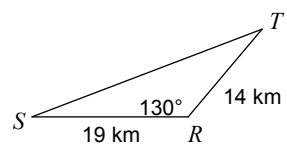
126) Find $m\angle E$



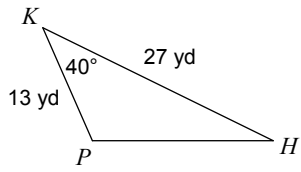
127) Find $m\angle H$



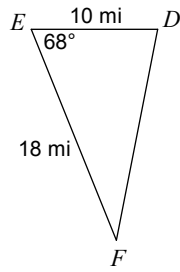
128) Find $m\angle S$



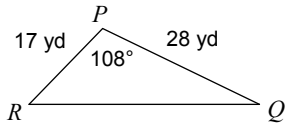
129) Find $m\angle H$



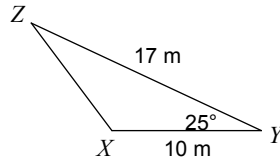
130) Find $m\angle F$



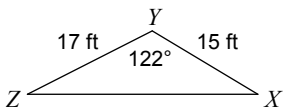
131) Find $m\angle Q$



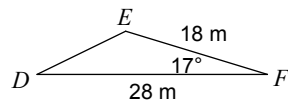
132) Find $m\angle Z$



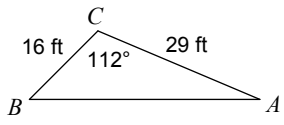
133) Find $m\angle Z$



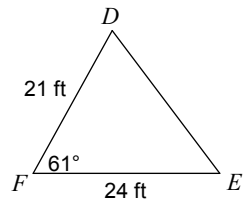
134) Find $m\angle D$



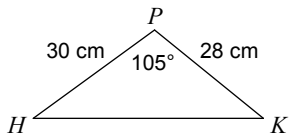
135) Find $m\angle A$



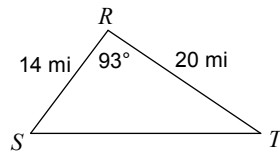
136) Find $m\angle D$



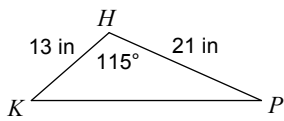
137) Find $m\angle K$



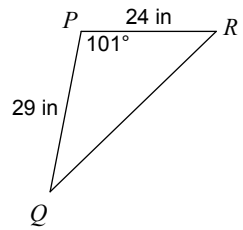
138) Find $m\angle S$



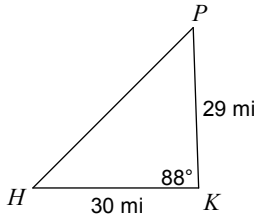
139) Find $m\angle P$



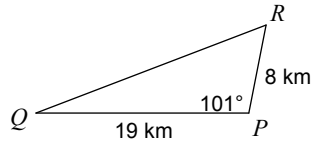
140) Find $m\angle Q$



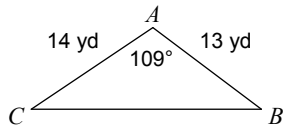
141) Find $m\angle H$



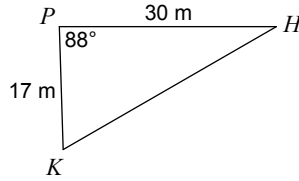
142) Find $m\angle Q$



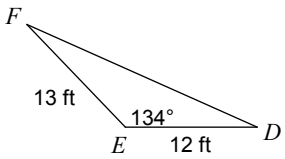
143) Find $m\angle B$



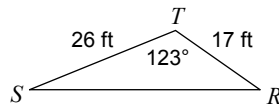
144) Find $m\angle K$



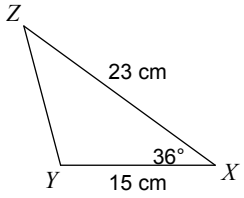
145) Find $m\angle F$



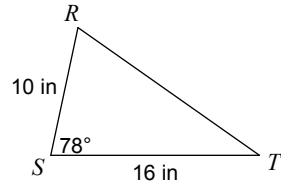
146) Find $m\angle R$



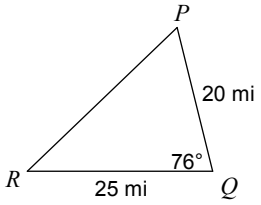
147) Find $m\angle Y$



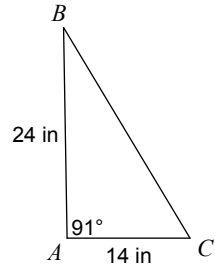
148) Find $m\angle T$



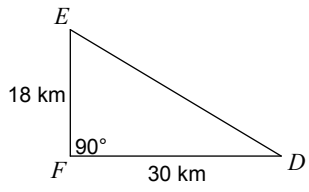
149) Find $m\angle R$



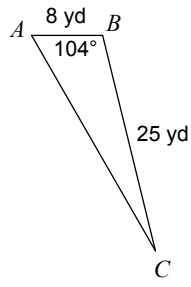
150) Find $m\angle B$



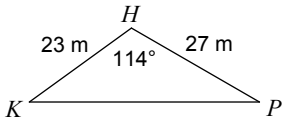
151) Find $m\angle D$



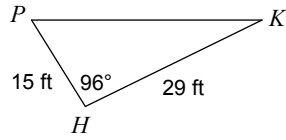
152) Find $m\angle C$



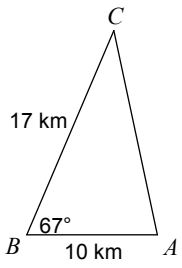
153) Find $m\angle P$



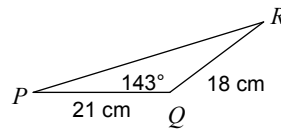
154) Find $m\angle P$



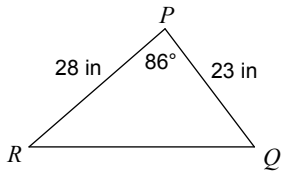
155) Find $m\angle C$



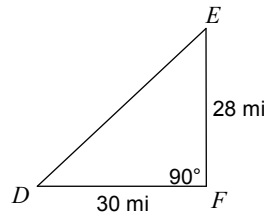
156) Find $m\angle R$



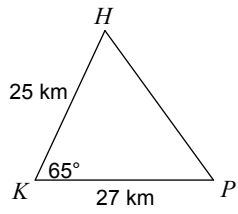
157) Find $m\angle Q$



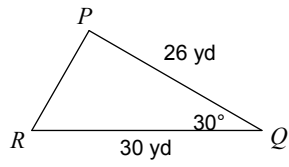
158) Find $m\angle D$



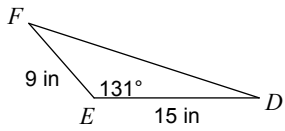
159) Find $m\angle H$



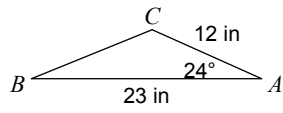
160) Find $m\angle R$



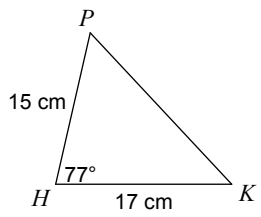
161) Find $m\angle F$



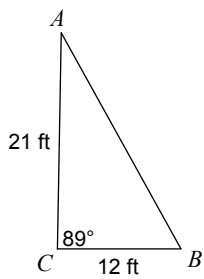
162) Find $m\angle B$



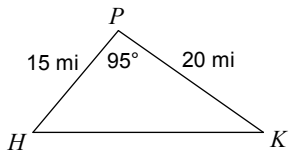
163) Find $m\angle P$



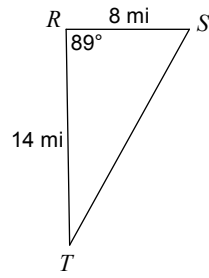
164) Find $m\angle A$



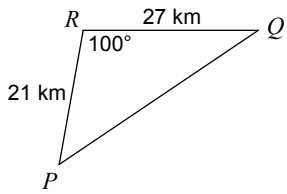
165) Find $m\angle K$



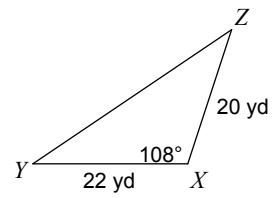
166) Find $m\angle S$



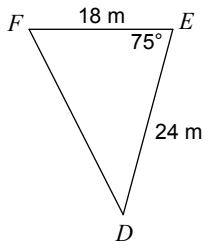
167) Find $m\angle P$



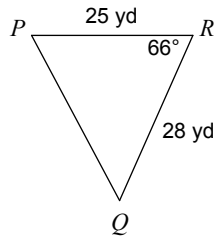
168) Find $m\angle Y$



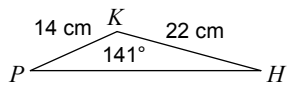
169) Find $m\angle F$



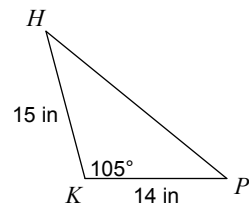
170) Find $m\angle P$



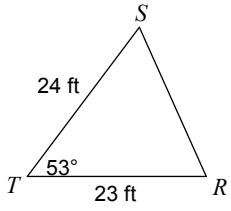
171) Find $m\angle H$



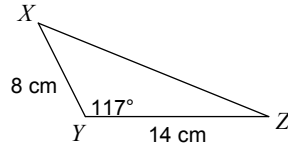
172) Find $m\angle H$



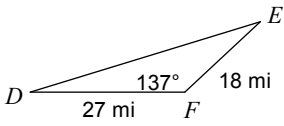
173) Find $m\angle R$



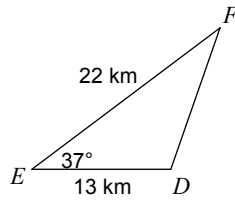
174) Find $m\angle Z$



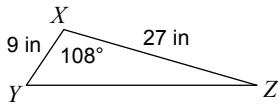
175) Find $m\angle D$



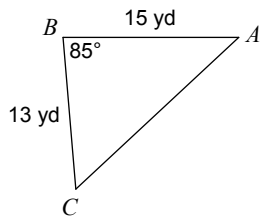
176) Find $m\angle F$



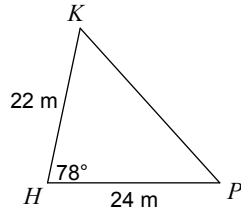
177) Find $m\angle Y$



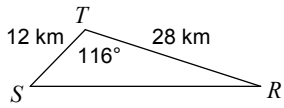
178) Find $m\angle C$



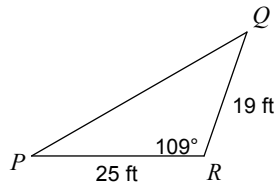
179) Find $m\angle P$



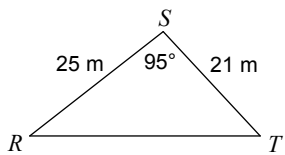
180) Find $m\angle R$



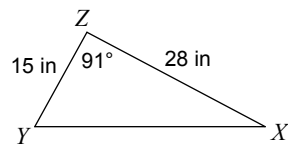
181) Find $m\angle P$



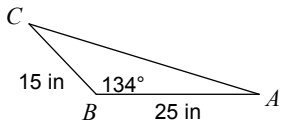
182) Find $m\angle T$



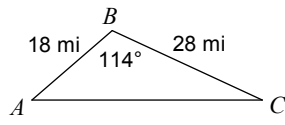
183) Find $m\angle X$



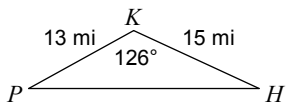
184) Find $m\angle C$



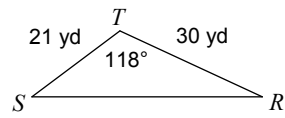
185) Find $m\angle C$



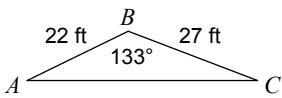
186) Find $m\angle H$



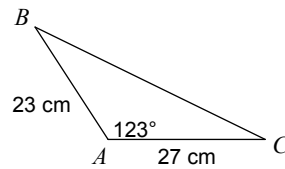
187) Find $m\angle R$



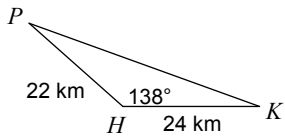
188) Find $m\angle C$



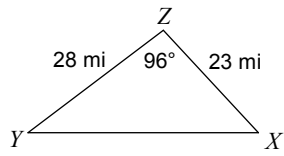
189) Find $m\angle B$



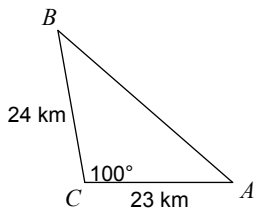
190) Find $m\angle P$



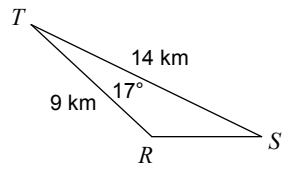
191) Find $m\angle X$



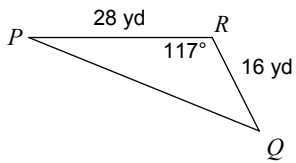
192) Find $m\angle A$



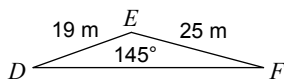
193) Find $m\angle R$



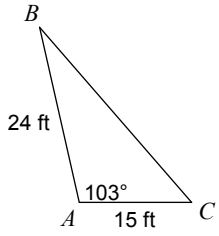
194) Find $m\angle P$



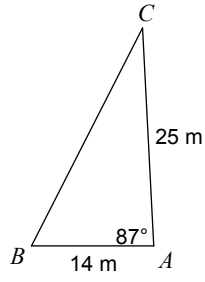
195) Find $m\angle F$



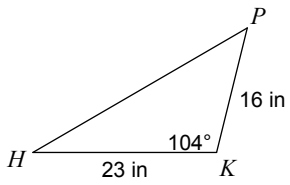
196) Find $m\angle B$



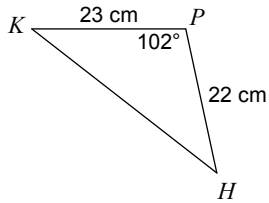
197) Find $m\angle B$



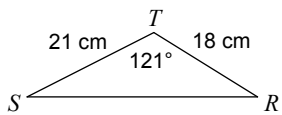
198) Find $m\angle H$



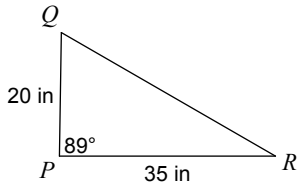
199) Find $m\angle K$



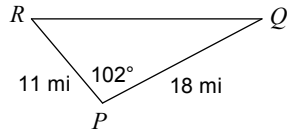
200) Find $m\angle R$



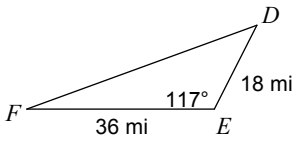
201) Find $m\angle Q$



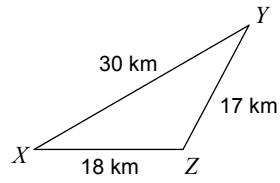
202) Find $m\angle Q$



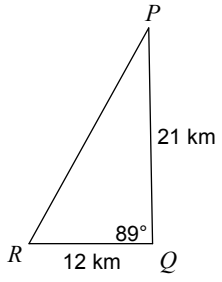
203) Find $m\angle F$



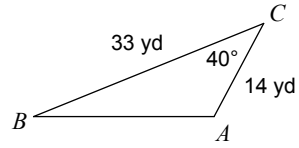
204) Find $m\angle Z$



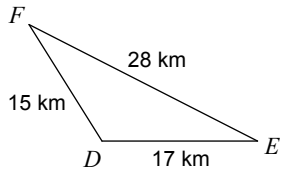
205) Find $m\angle R$



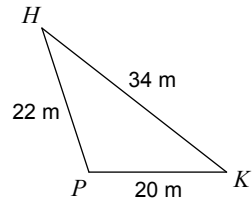
206) Find $m\angle A$



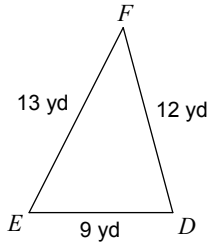
207) Find $m\angle D$



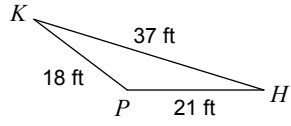
208) Find $m\angle K$



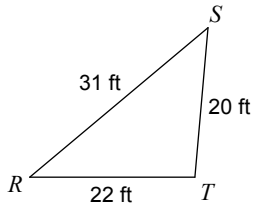
209) Find $m\angle F$



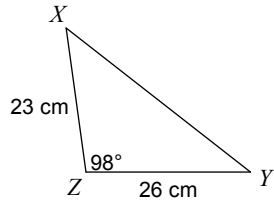
210) Find $m\angle P$



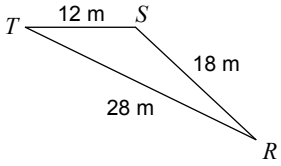
211) Find $m\angle T$



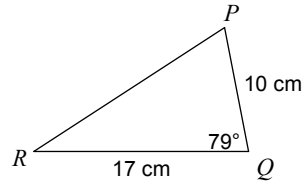
212) Find $m\angle X$



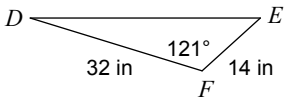
213) Find $m\angle S$



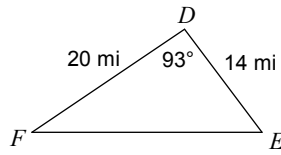
214) Find $m\angle R$



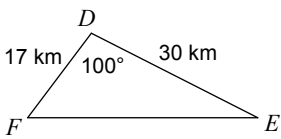
215) Find $m\angle D$



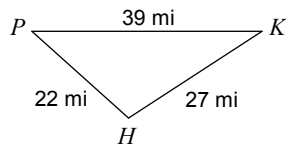
216) Find $m\angle E$



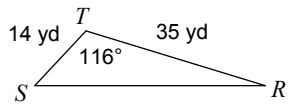
217) Find $m\angle E$



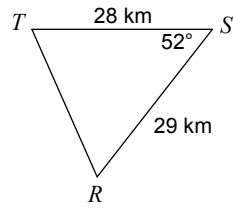
218) Find $m\angle P$



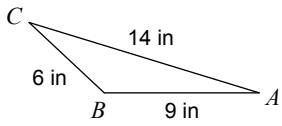
219) Find $m\angle R$



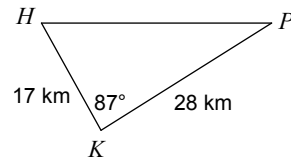
220) Find $m\angle T$



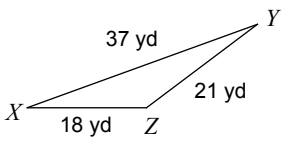
221) Find $m\angle A$



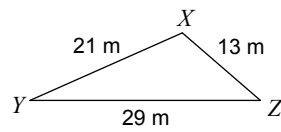
222) Find $m\angle H$



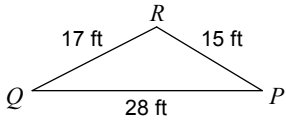
223) Find $m\angle Z$



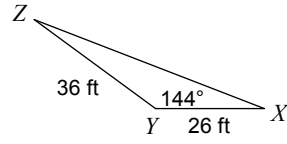
224) Find $m\angle Z$



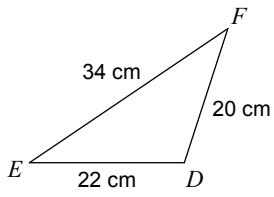
225) Find $m\angle R$



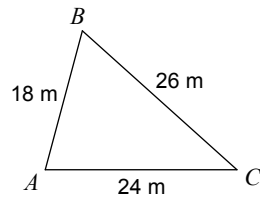
226) Find $m\angle Z$



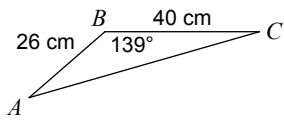
227) Find $m\angle E$



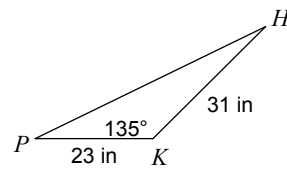
228) Find $m\angle B$



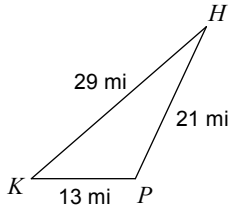
229) Find $m\angle C$



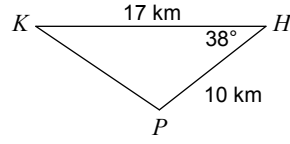
230) Find $m\angle H$



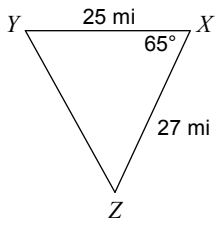
231) Find $m\angle P$



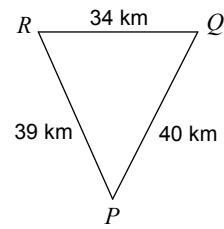
232) Find $m\angle P$



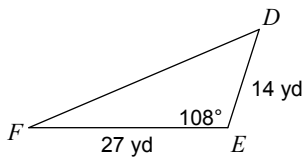
233) Find $m\angle Y$



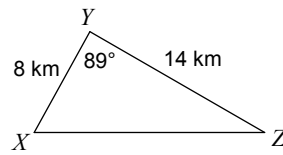
234) Find $m\angle R$



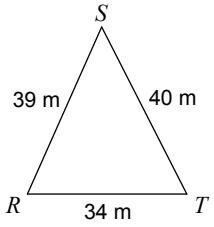
235) Find $m\angle F$



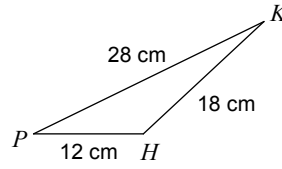
236) Find $m\angle Z$



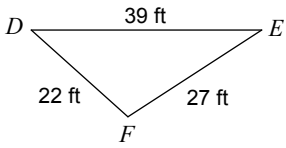
237) Find $m\angle T$



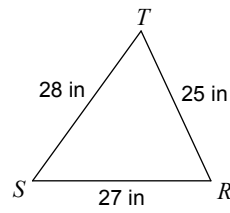
238) Find $m\angle K$



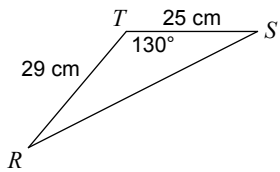
239) Find $m\angle F$



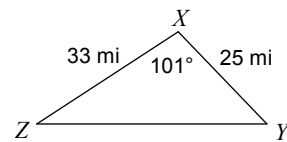
240) Find $m\angle S$



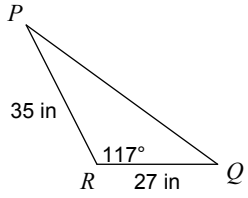
241) Find $m\angle R$



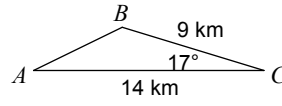
242) Find $m\angle Y$



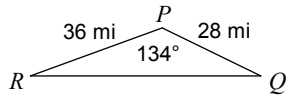
243) Find $m\angle P$



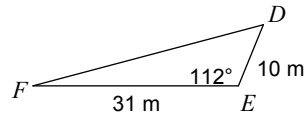
244) Find $m\angle A$



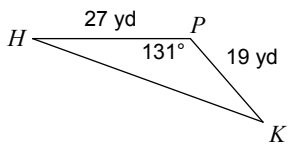
245) Find $m\angle Q$



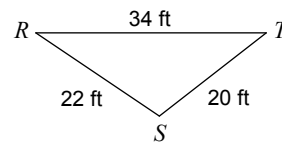
246) Find $m\angle F$



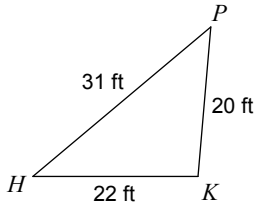
247) Find $m\angle K$



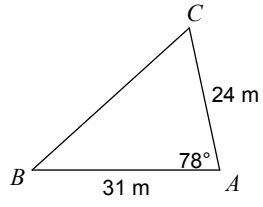
248) Find $m\angle R$



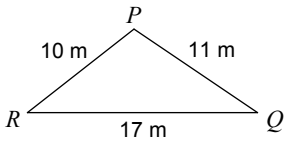
249) Find $m\angle H$



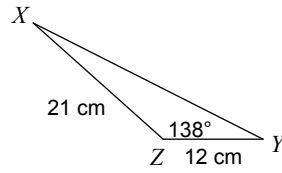
250) Find $m\angle B$



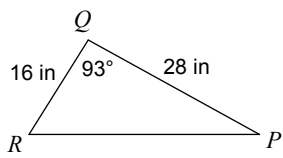
251) Find $m\angle P$



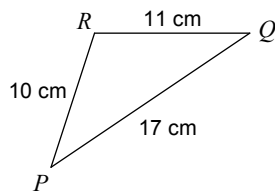
252) Find $m\angle X$



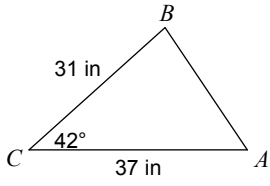
253) Find $m\angle R$



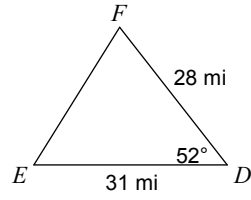
254) Find $m\angle P$



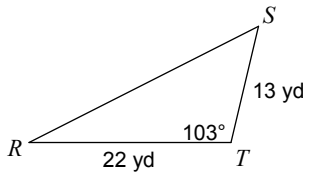
255) Find $m\angle A$



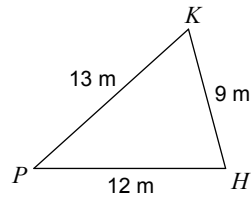
256) Find $m\angle E$



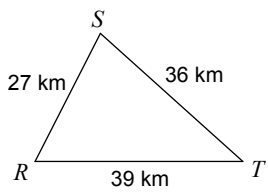
257) Find $m\angle R$



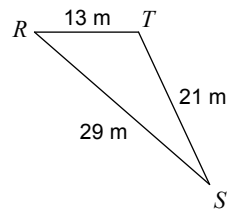
258) Find $m\angle K$



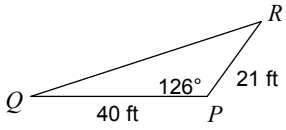
259) Find $m\angle R$



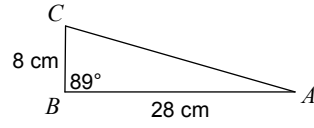
260) Find $m\angle T$



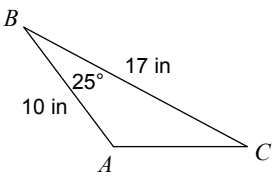
261) Find $m\angle Q$



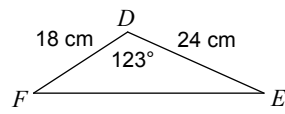
262) Find $m\angle C$



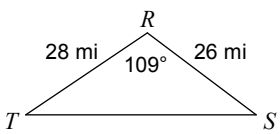
263) Find $m\angle C$



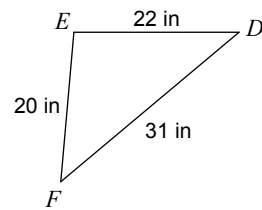
264) Find $m\angle E$



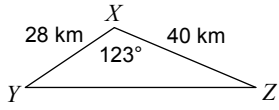
265) Find $m\angle S$



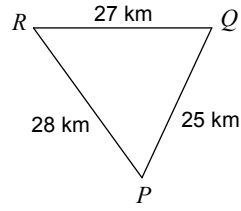
266) Find $m\angle D$



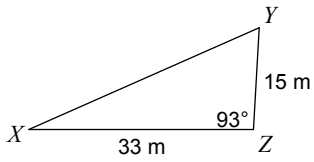
267) Find $m\angle Y$



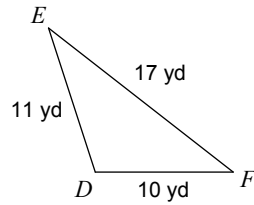
268) Find $m\angle Q$



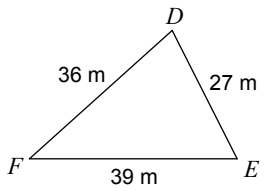
269) Find $m\angle X$



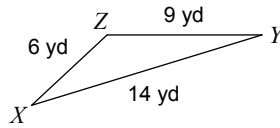
270) Find $m\angle E$



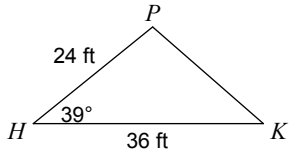
271) Find $m\angle F$



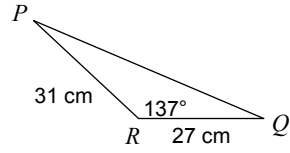
272) Find $m\angle X$



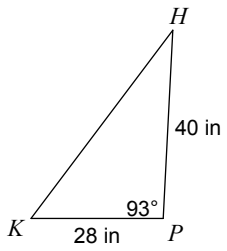
273) Find $m\angle P$



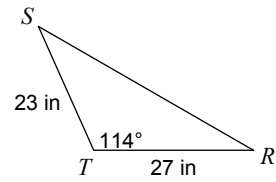
274) Find $m\angle P$



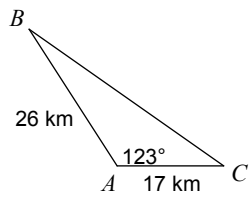
275) Find $m\angle K$



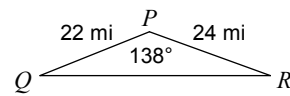
276) Find $m\angle R$



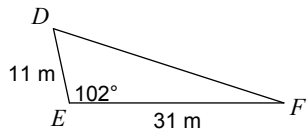
277) Find $m\angle B$



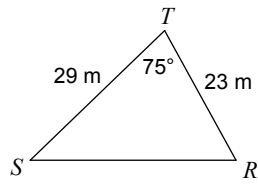
278) Find $m\angle Q$



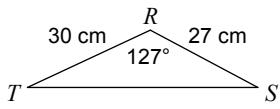
279) Find $m\angle F$



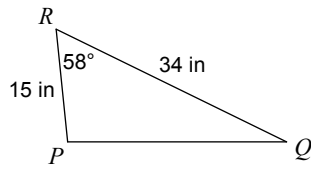
280) Find $m\angle R$



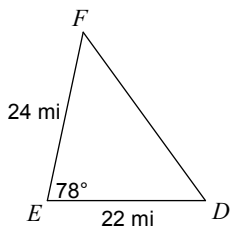
281) Find $m\angle S$



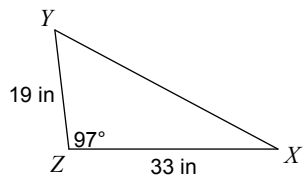
282) Find $m\angle P$



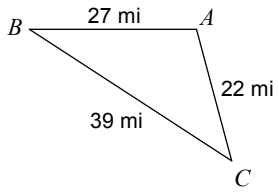
283) Find $m\angle F$



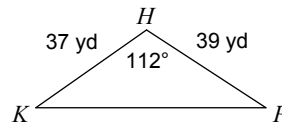
284) Find $m\angle X$



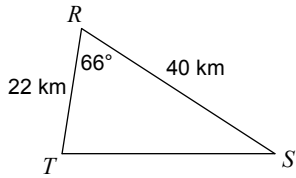
285) Find $m\angle C$



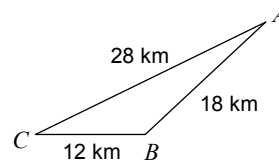
286) Find $m\angle P$



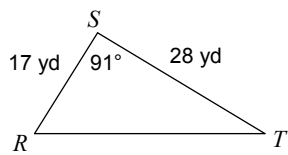
287) Find $m\angle S$



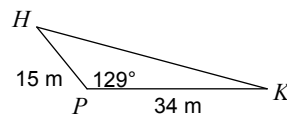
288) Find $m\angle A$



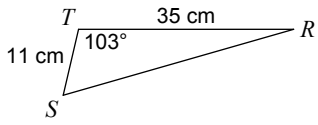
289) Find $m\angle T$



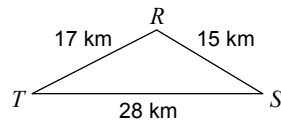
290) Find $m\angle K$



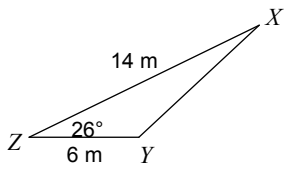
291) Find $m\angle R$



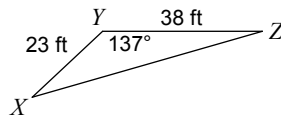
292) Find $m\angle S$



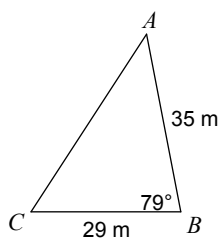
293) Find $m\angle X$



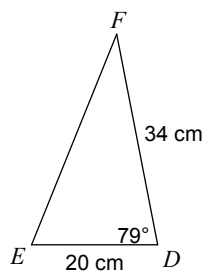
294) Find $m\angle Z$



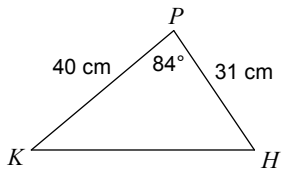
295) Find $m\angle C$



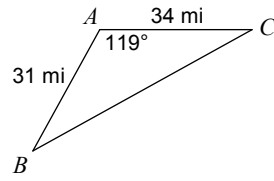
296) Find $m\angle E$



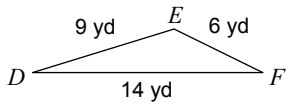
297) Find $m\angle K$



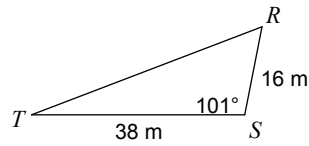
298) Find $m\angle B$



299) Find $m\angle E$

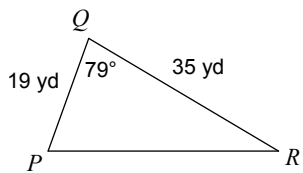


300) Find $m\angle T$

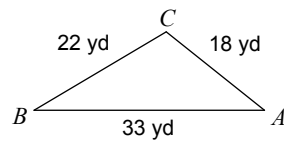


Find all missing measures of a triangle.

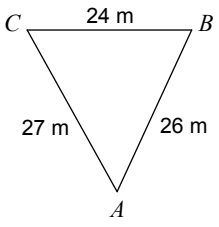
301)



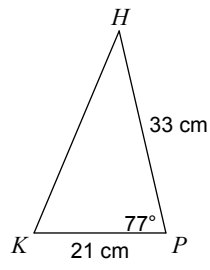
302)



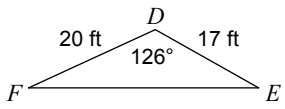
303)



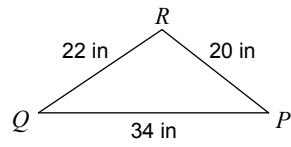
304)



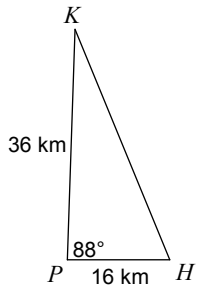
305)



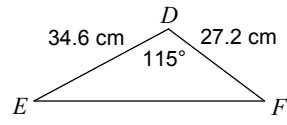
306)



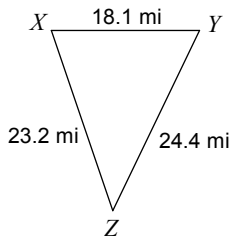
307)



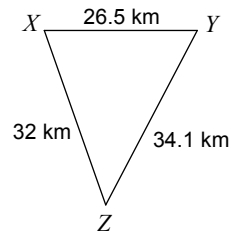
308)



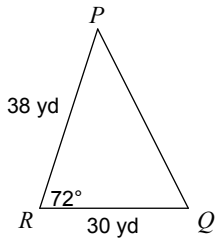
309)



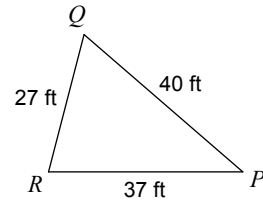
310)



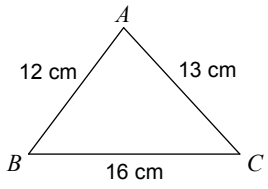
311)



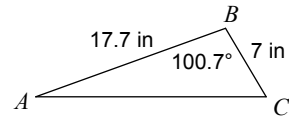
312)



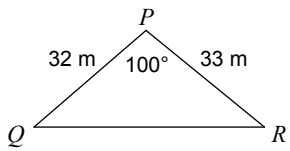
313)



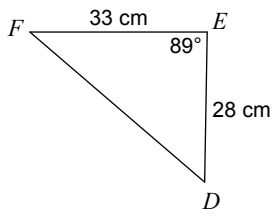
314)



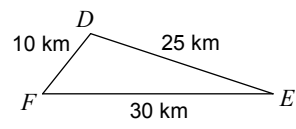
315)



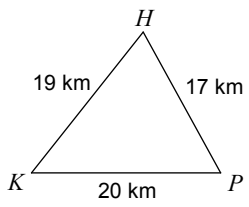
316)



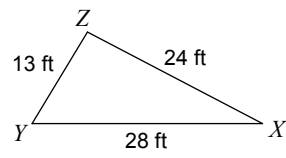
317)



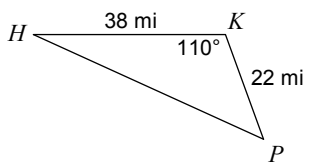
318)



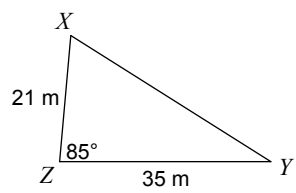
319)



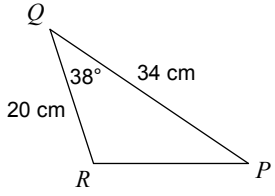
320)



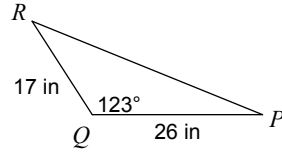
321)



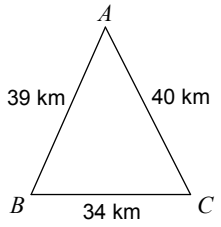
322)



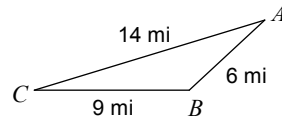
323)



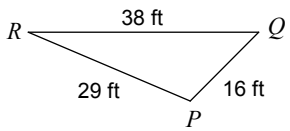
324)



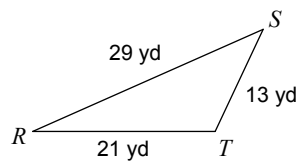
325)



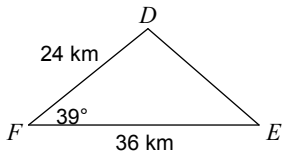
326)



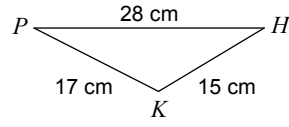
327)



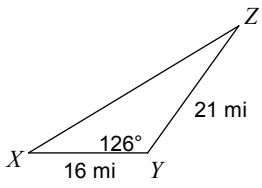
328)



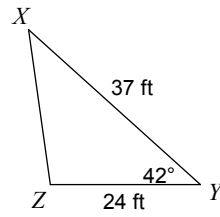
329)



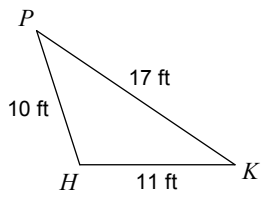
330)



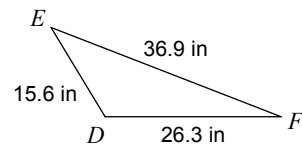
331)



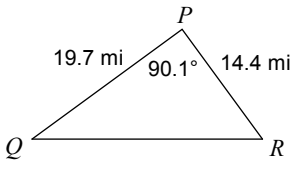
332)



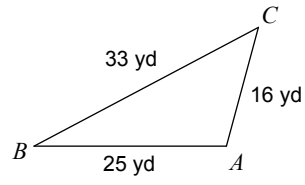
333)



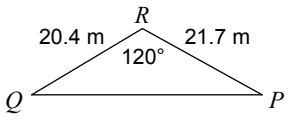
334)



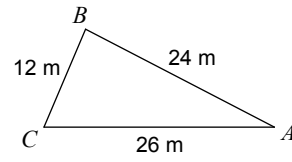
335)



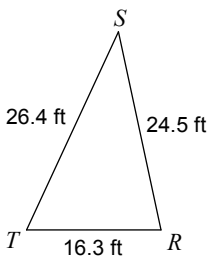
336)



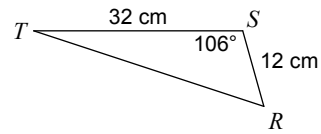
337)



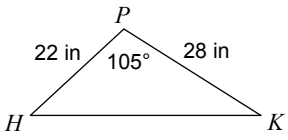
338)



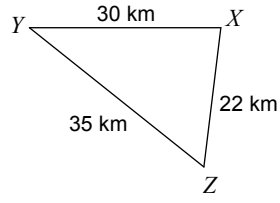
339)



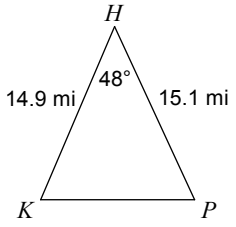
340)



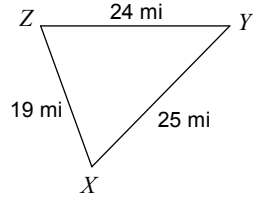
341)



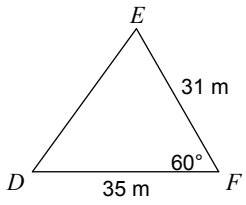
342)



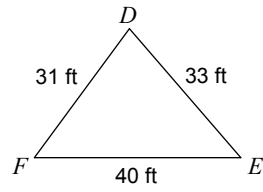
343)



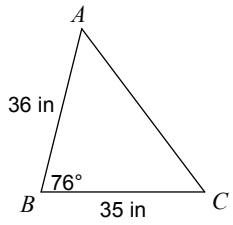
344)



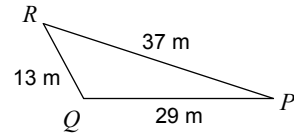
345)



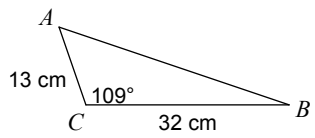
346)



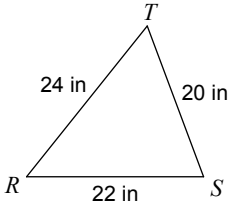
347)



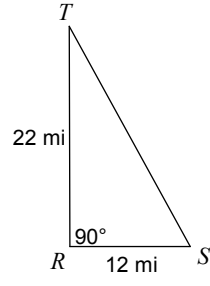
348)



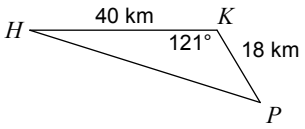
349)



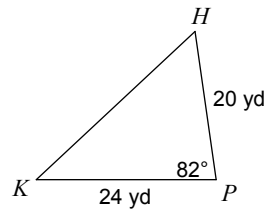
350)



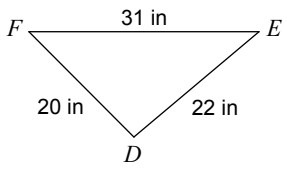
351)



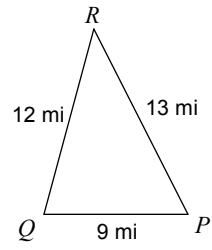
352)



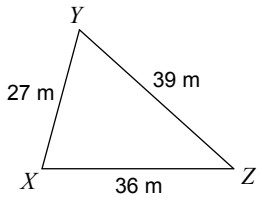
353)



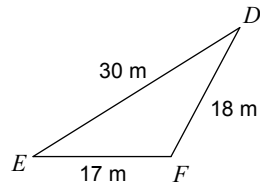
354)



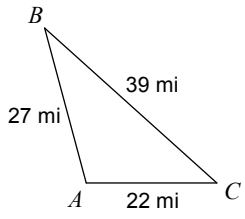
355)



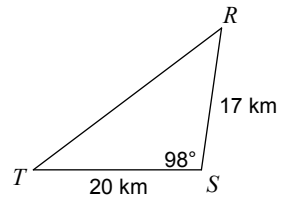
356)



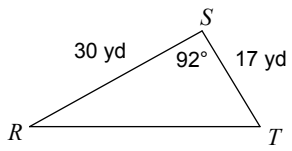
357)



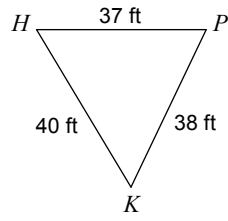
358)



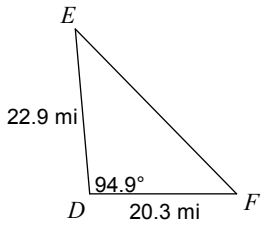
359)



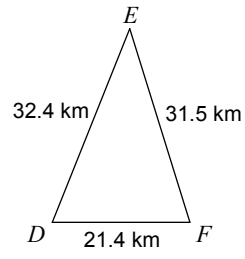
360)



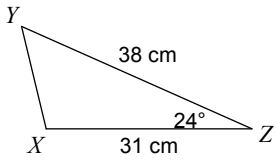
361)



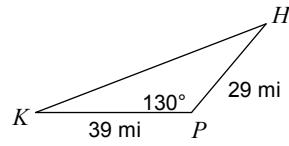
362)



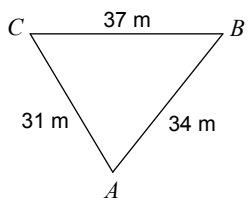
363)



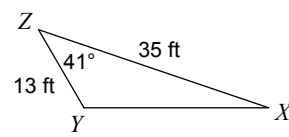
364)



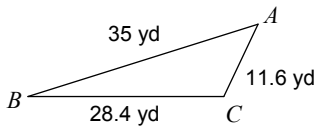
365)



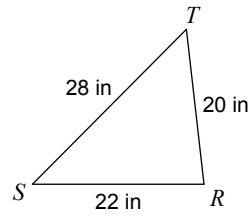
366)



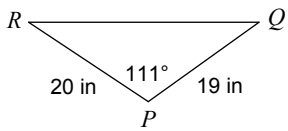
367)



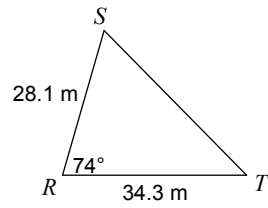
368)



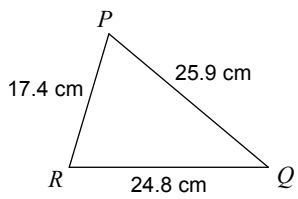
369)



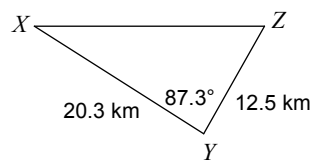
370)



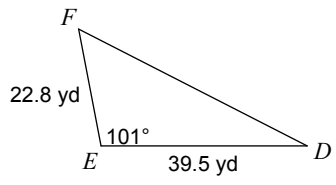
371)



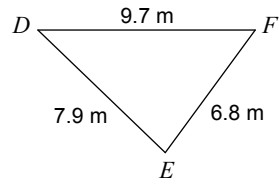
372)



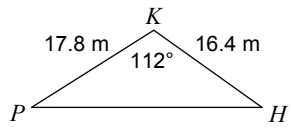
373)



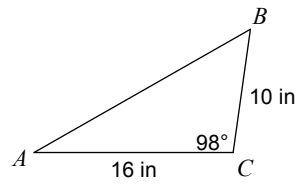
374)



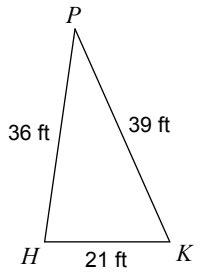
375)



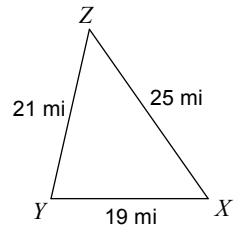
376)



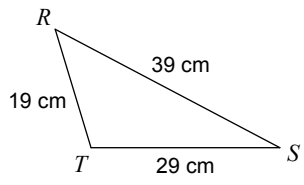
377)



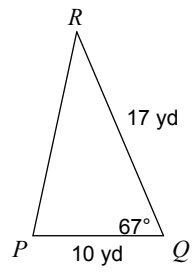
378)



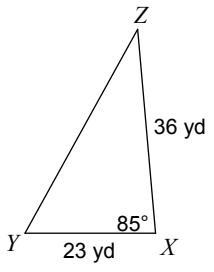
379)



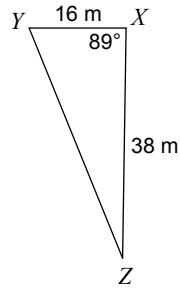
380)



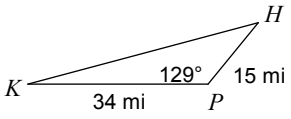
381)



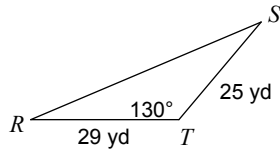
382)



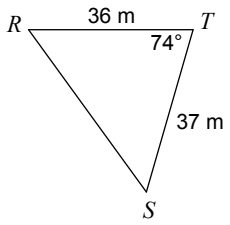
383)



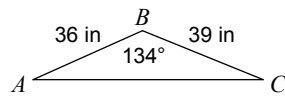
384)



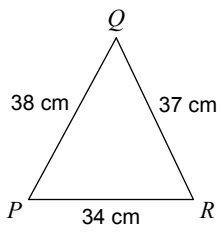
385)



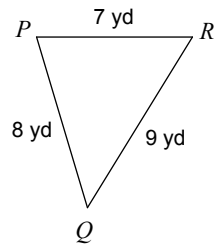
386)



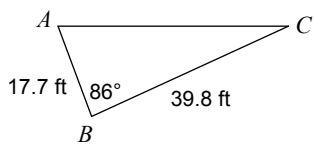
387)



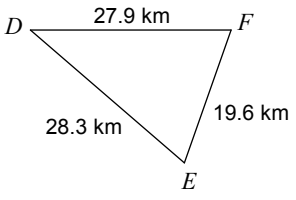
388)



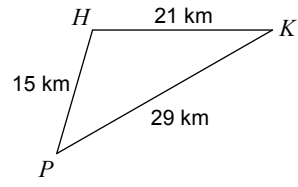
389)



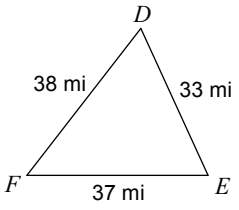
390)



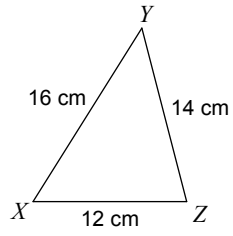
391)



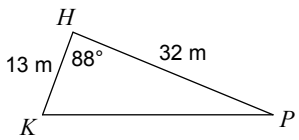
392)



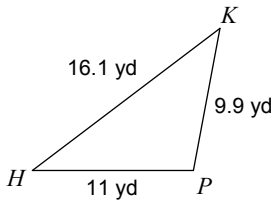
393)



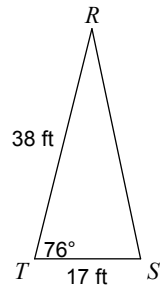
394)



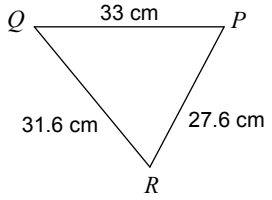
395)



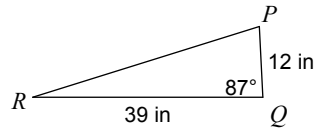
396)



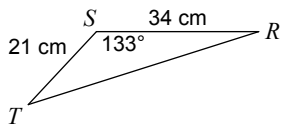
397)



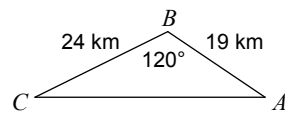
398)



399)



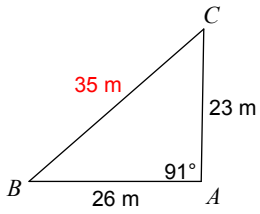
400)



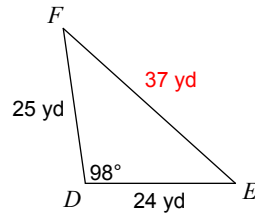
Trigonometry - The Law of Cosine

Find a missing side of a triangle. Use The Law of Cosine to help yourself.

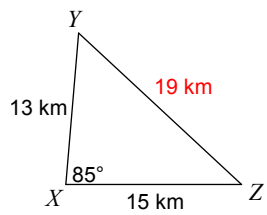
1) Find BC



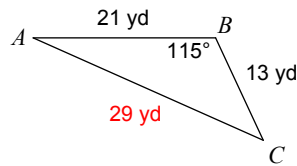
2) Find EF



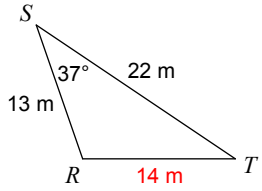
3) Find YZ



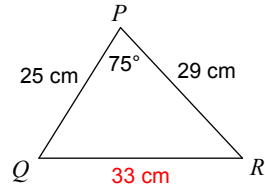
4) Find AC



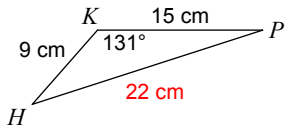
5) Find RT



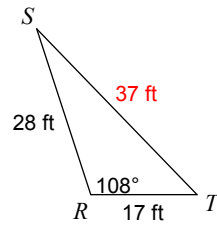
6) Find QR



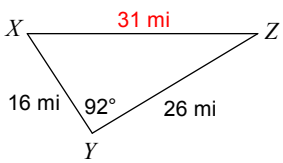
7) Find HP



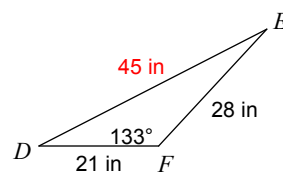
8) Find ST



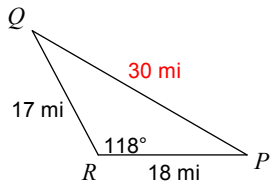
9) Find XZ



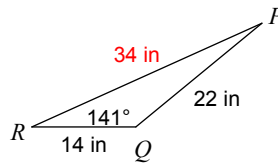
10) Find DE



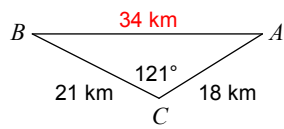
11) Find PQ



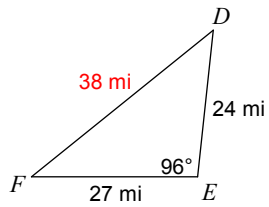
12) Find PR



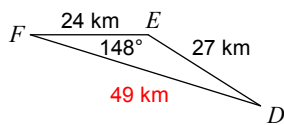
13) Find AB



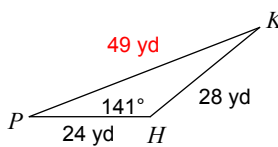
14) Find DF



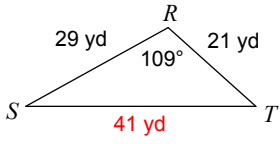
15) Find DF



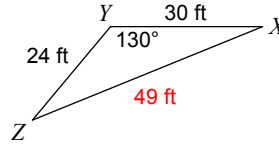
16) Find KP



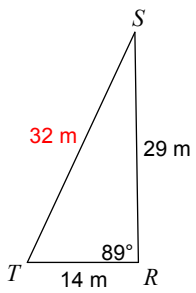
17) Find ST



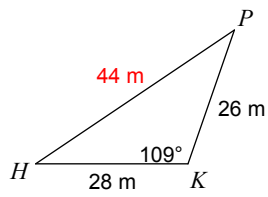
18) Find XZ



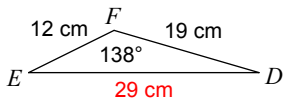
19) Find ST



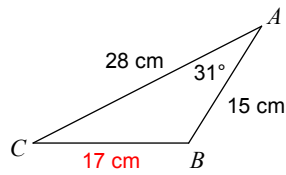
20) Find HP



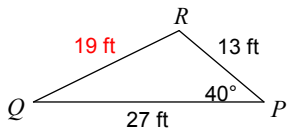
21) Find DE



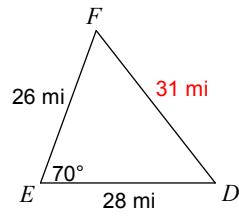
22) Find BC



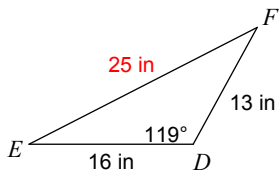
23) Find QR



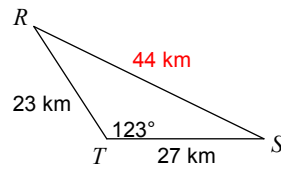
24) Find DF



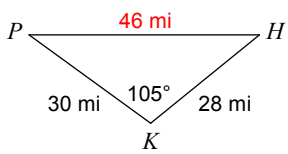
25) Find EF



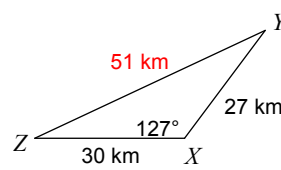
26) Find RS



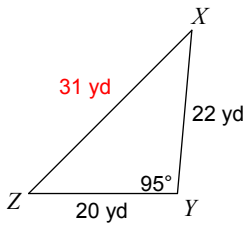
27) Find HP



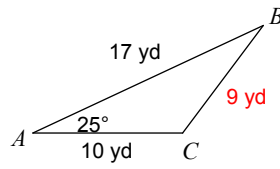
28) Find YZ



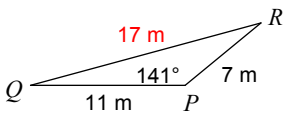
29) Find XZ



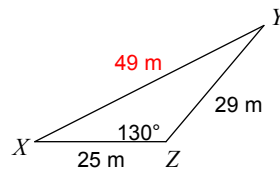
30) Find BC



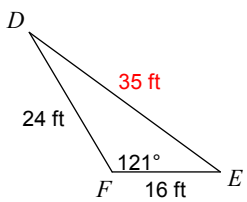
31) Find QR



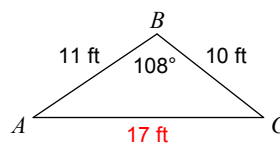
32) Find XY



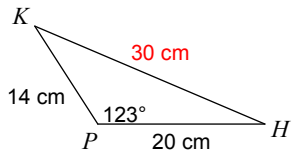
33) Find DE



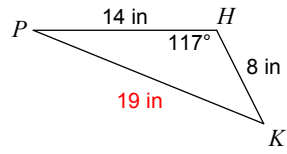
34) Find AC



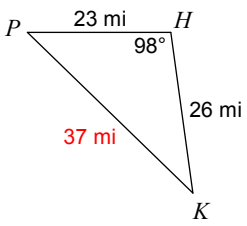
35) Find HK



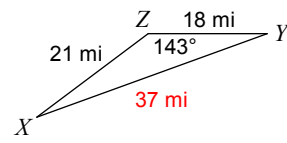
36) Find KP



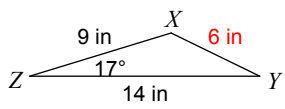
37) Find KP



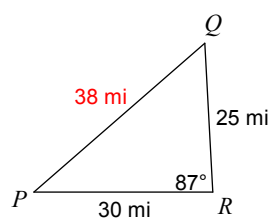
38) Find XY



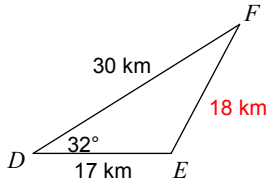
39) Find XY



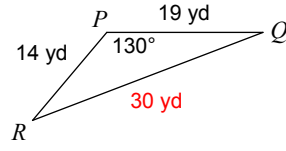
40) Find PQ



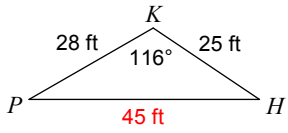
41) Find EF



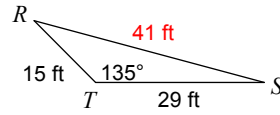
42) Find QR



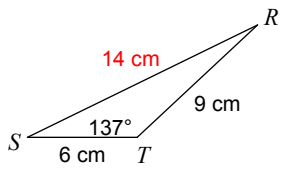
43) Find HP



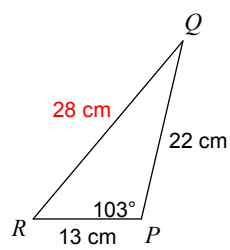
44) Find RS



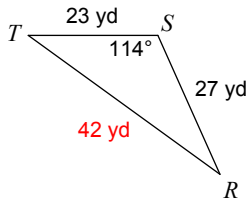
45) Find RS



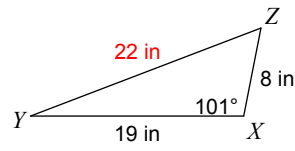
46) Find QR



47) Find RT



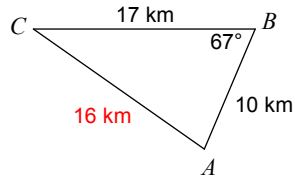
48) Find YZ



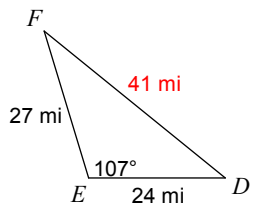
49) Find PQ



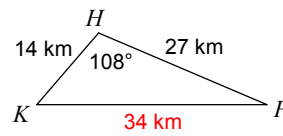
50) Find AC



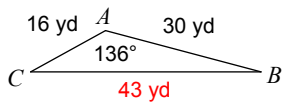
51) Find DF



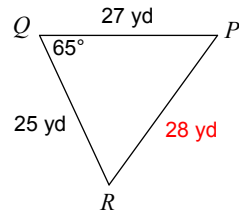
52) Find KP



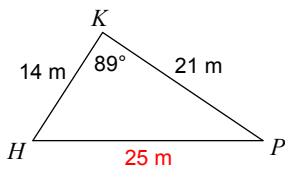
53) Find BC



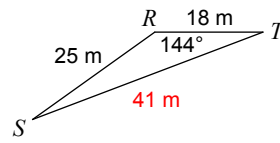
54) Find PR



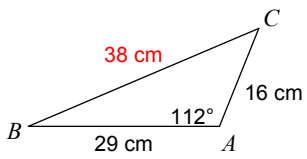
55) Find HP



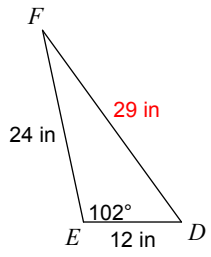
56) Find ST



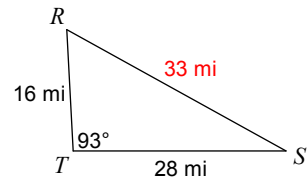
57) Find BC



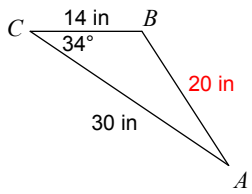
58) Find DF



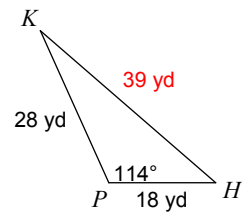
59) Find RS



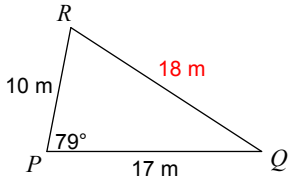
60) Find AB



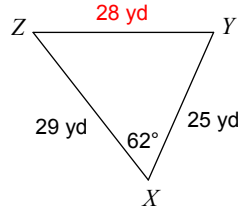
61) Find HK



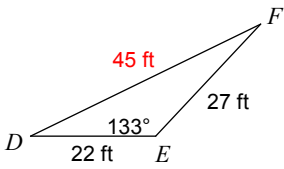
62) Find QR



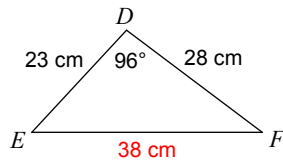
63) Find YZ



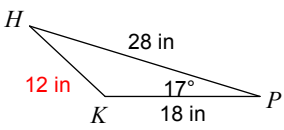
64) Find DF



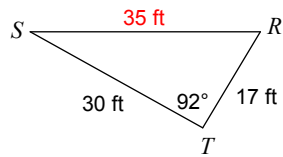
65) Find EF



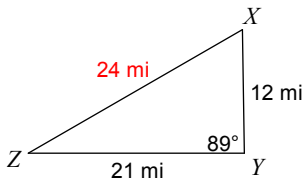
66) Find HK



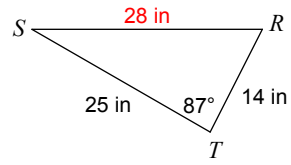
67) Find RS



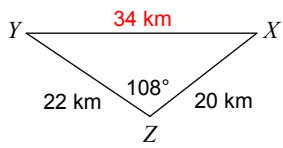
68) Find XZ



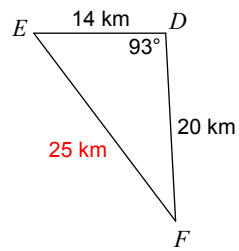
69) Find RS



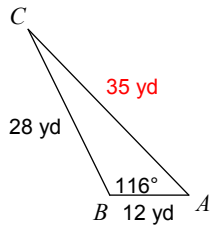
70) Find XY



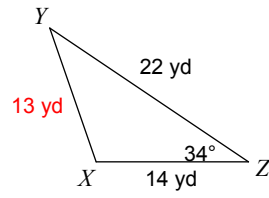
71) Find EF



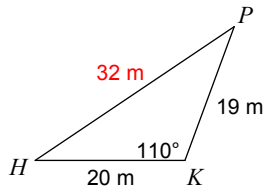
72) Find AC



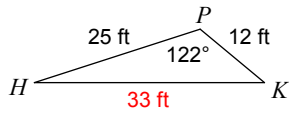
73) Find XY



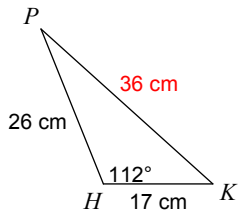
74) Find HP



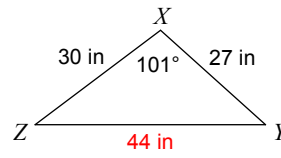
75) Find HK



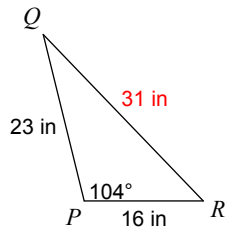
76) Find KP



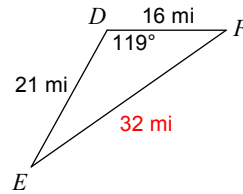
77) Find YZ



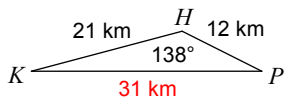
78) Find QR



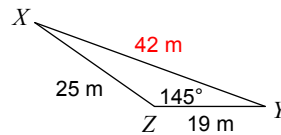
79) Find EF



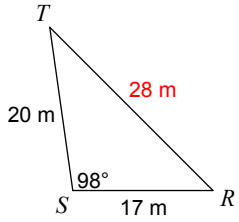
80) Find KP



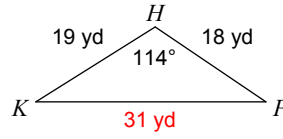
81) Find XY



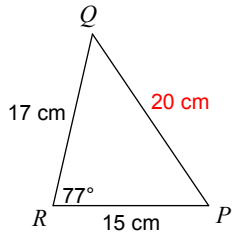
82) Find RT



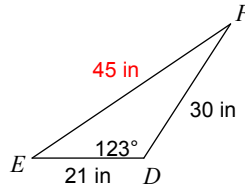
83) Find KP



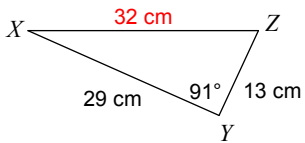
84) Find PQ



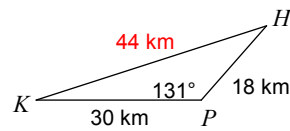
85) Find EF



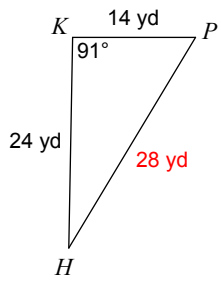
86) Find XZ



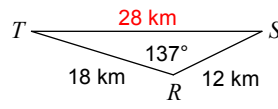
87) Find HK



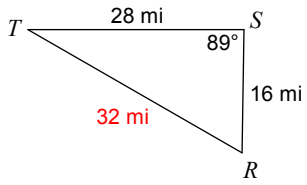
88) Find HP



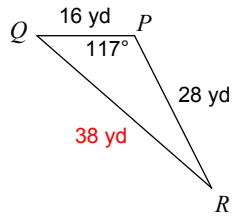
89) Find ST



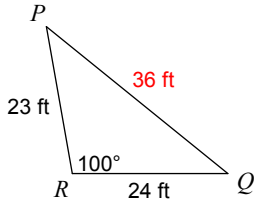
90) Find RT



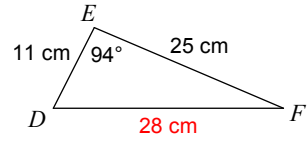
91) Find QR



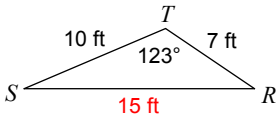
92) Find PQ



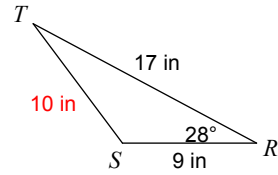
93) Find DF



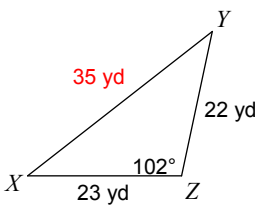
94) Find RS



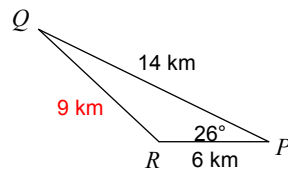
95) Find ST



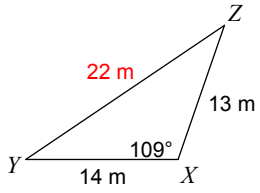
96) Find XY



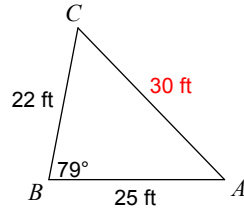
97) Find QR



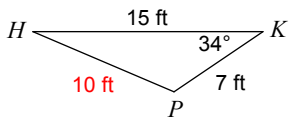
98) Find YZ



99) Find AC

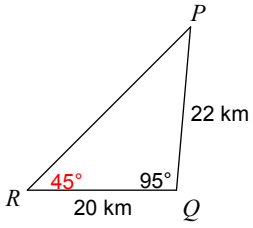


100) Find HP

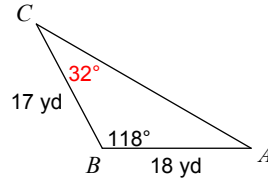


Find a missing angle of a triangle. Use The Law of Cosine to help yourself.

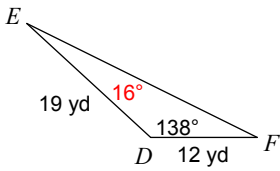
101) Find $m\angle R$



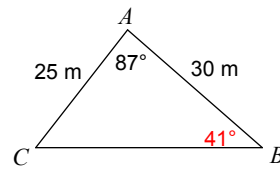
102) Find $m\angle C$



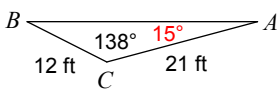
103) Find $m\angle E$



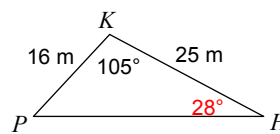
104) Find $m\angle B$



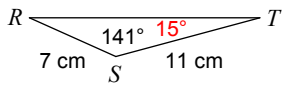
105) Find $m\angle A$



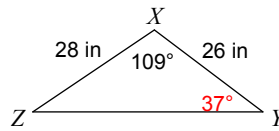
106) Find $m\angle H$



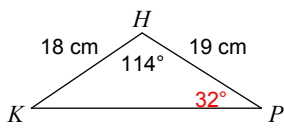
107) Find $m\angle T$



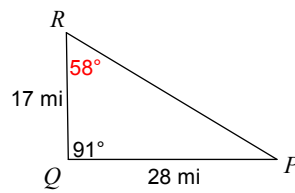
108) Find $m\angle Y$



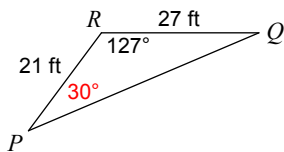
109) Find $m\angle P$



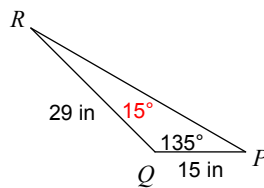
110) Find $m\angle R$



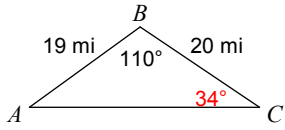
111) Find $m\angle P$



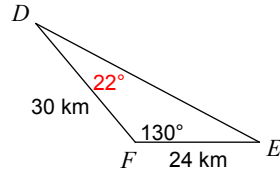
112) Find $m\angle R$



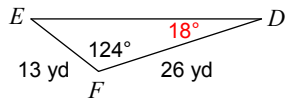
113) Find $m\angle C$



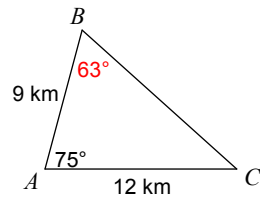
114) Find $m\angle D$



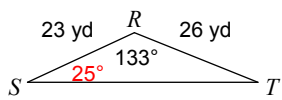
115) Find $m\angle D$



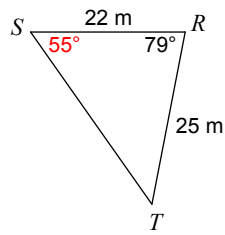
116) Find $m\angle B$



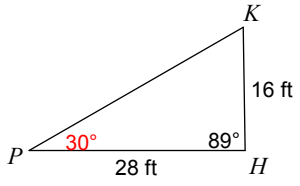
117) Find $m\angle S$



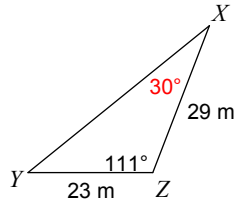
118) Find $m\angle S$



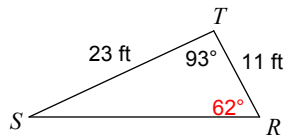
119) Find $m\angle P$



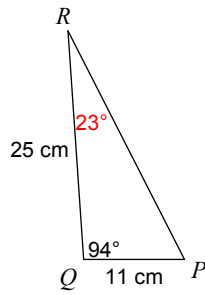
120) Find $m\angle X$



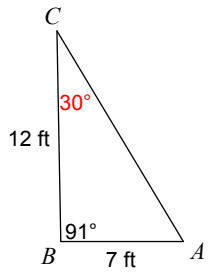
121) Find $m\angle R$



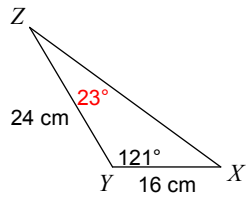
122) Find $m\angle R$



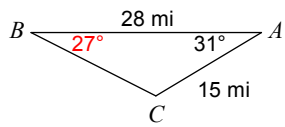
123) Find $m\angle C$



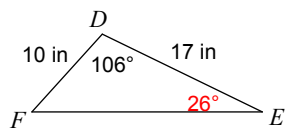
124) Find $m\angle Z$



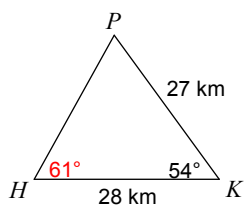
125) Find $m\angle B$



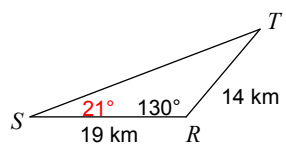
126) Find $m\angle E$



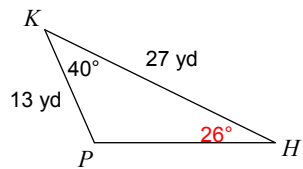
127) Find $m\angle H$



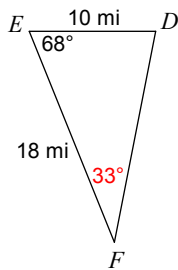
128) Find $m\angle S$



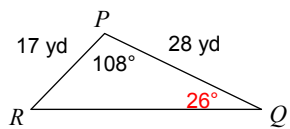
129) Find $m\angle H$



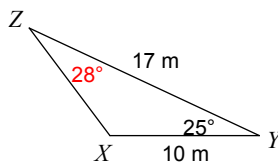
130) Find $m\angle F$



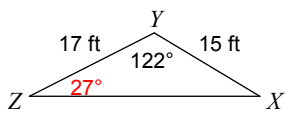
131) Find $m\angle Q$



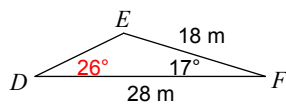
132) Find $m\angle Z$



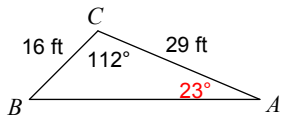
133) Find $m\angle Z$



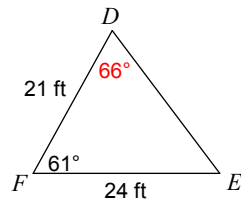
134) Find $m\angle D$



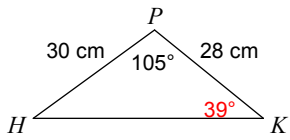
135) Find $m\angle A$



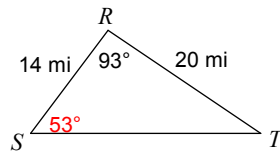
136) Find $m\angle D$



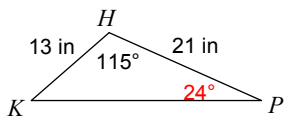
137) Find $m\angle K$



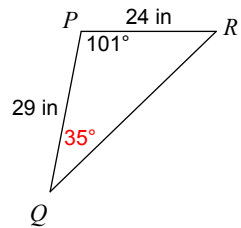
138) Find $m\angle S$



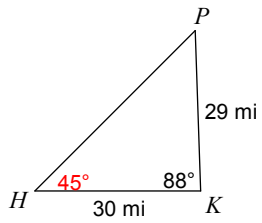
139) Find $m\angle P$



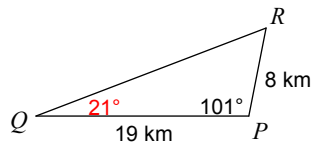
140) Find $m\angle Q$



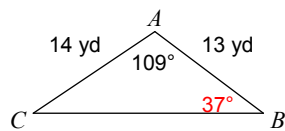
141) Find $m\angle H$



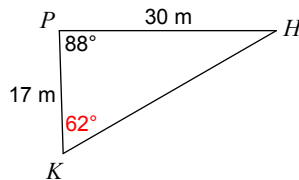
142) Find $m\angle Q$



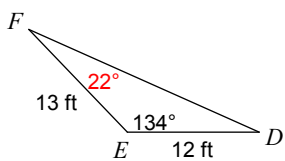
143) Find $m\angle B$



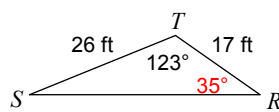
144) Find $m\angle K$



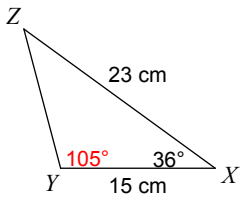
145) Find $m\angle F$



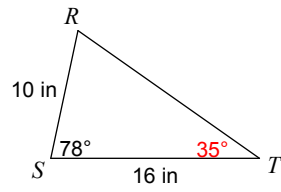
146) Find $m\angle R$



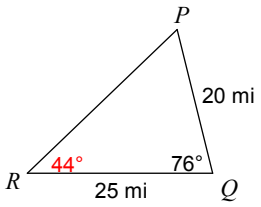
147) Find $m\angle Y$



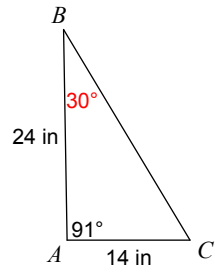
148) Find $m\angle T$



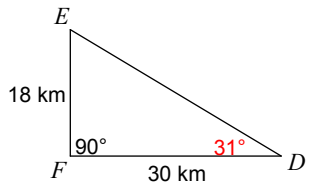
149) Find $m\angle R$



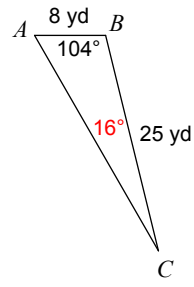
150) Find $m\angle B$



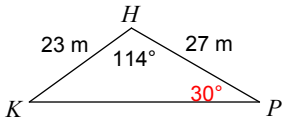
151) Find $m\angle D$



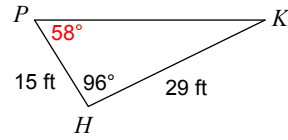
152) Find $m\angle C$



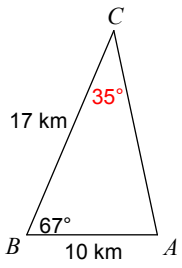
153) Find $m\angle P$



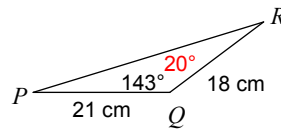
154) Find $m\angle P$



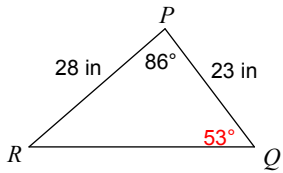
155) Find $m\angle C$



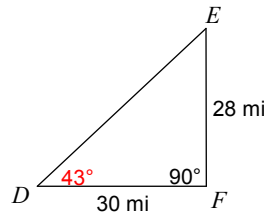
156) Find $m\angle R$



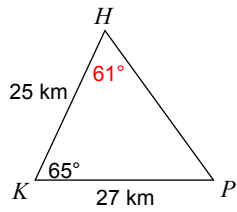
157) Find $m\angle Q$



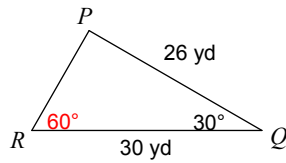
158) Find $m\angle D$



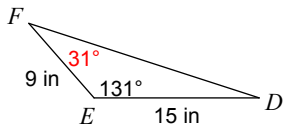
159) Find $m\angle H$



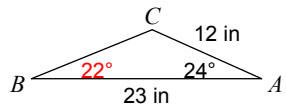
160) Find $m\angle R$



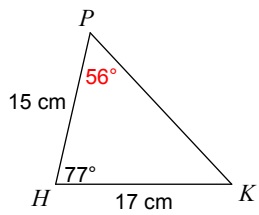
161) Find $m\angle F$



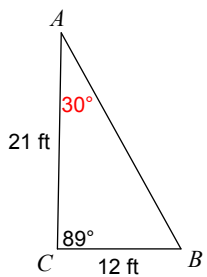
162) Find $m\angle B$



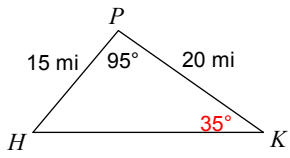
163) Find $m\angle P$



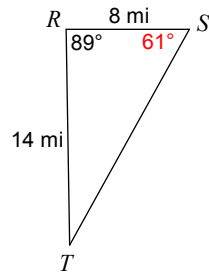
164) Find $m\angle A$



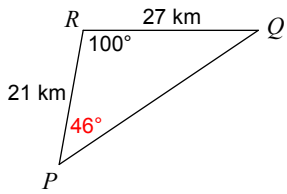
165) Find $m\angle K$



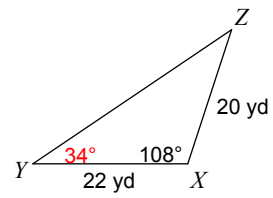
166) Find $m\angle S$



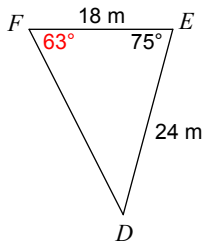
167) Find $m\angle P$



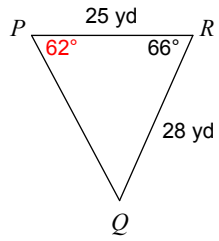
168) Find $m\angle Y$



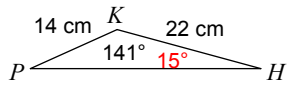
169) Find $m\angle F$



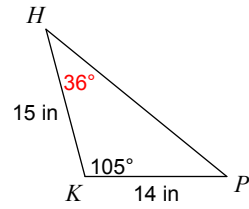
170) Find $m\angle P$



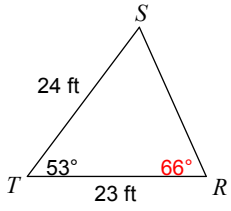
171) Find $m\angle H$



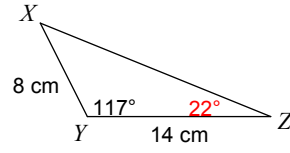
172) Find $m\angle H$



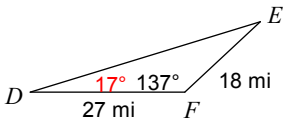
173) Find $m\angle R$



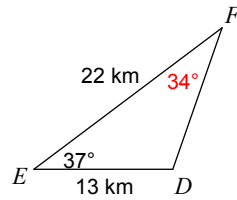
174) Find $m\angle Z$



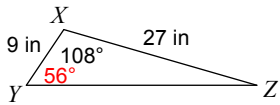
175) Find $m\angle D$



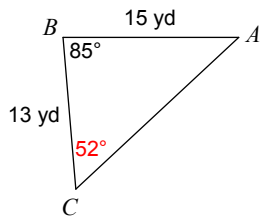
176) Find $m\angle F$



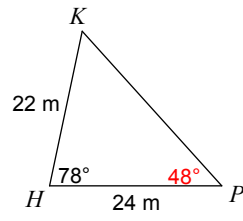
177) Find $m\angle Y$



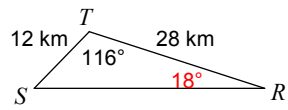
178) Find $m\angle C$



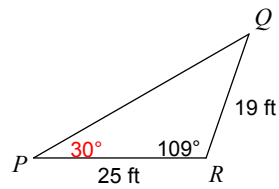
179) Find $m\angle P$



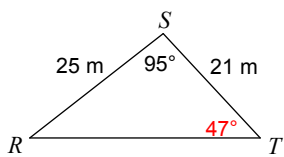
180) Find $m\angle R$



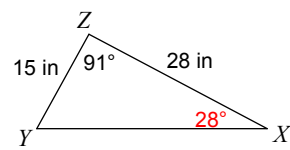
181) Find $m\angle P$



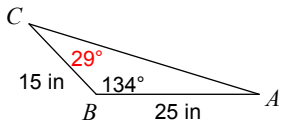
182) Find $m\angle T$



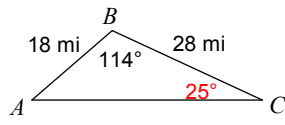
183) Find $m\angle X$



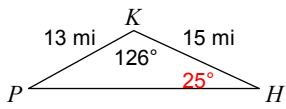
184) Find $m\angle C$



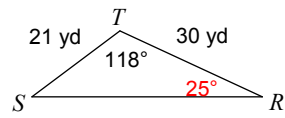
185) Find $m\angle C$



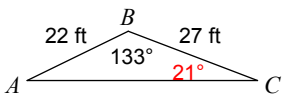
186) Find $m\angle H$



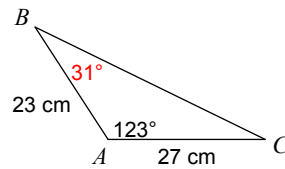
187) Find $m\angle R$



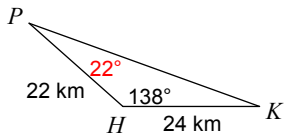
188) Find $m\angle C$



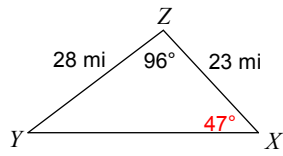
189) Find $m\angle B$



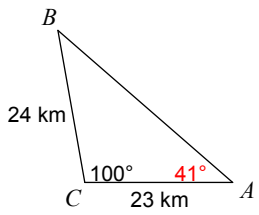
190) Find $m\angle P$



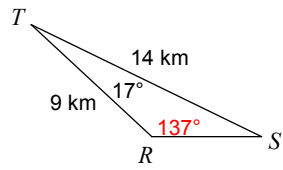
191) Find $m\angle X$



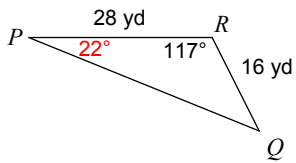
192) Find $m\angle A$



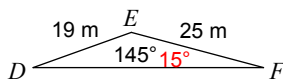
193) Find $m\angle R$



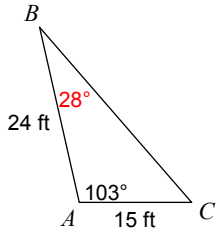
194) Find $m\angle P$



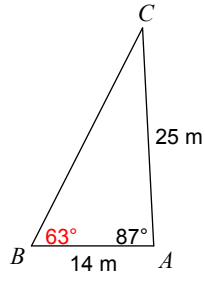
195) Find $m\angle F$



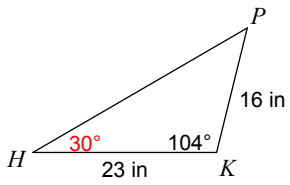
196) Find $m\angle B$



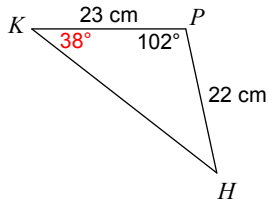
197) Find $m\angle B$



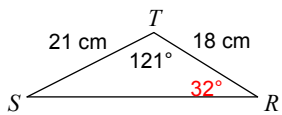
198) Find $m\angle H$



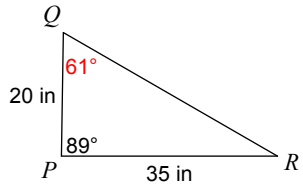
199) Find $m\angle K$



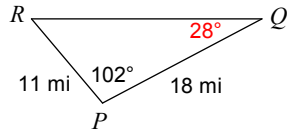
200) Find $m\angle R$



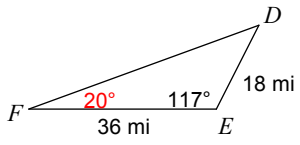
201) Find $m\angle Q$



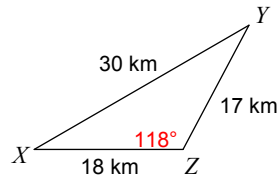
202) Find $m\angle Q$



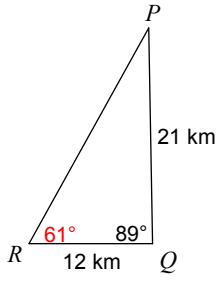
203) Find $m\angle F$



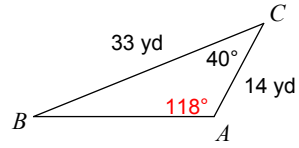
204) Find $m\angle Z$



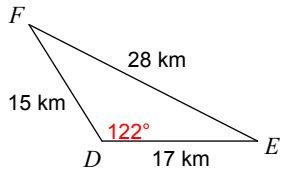
205) Find $m\angle R$



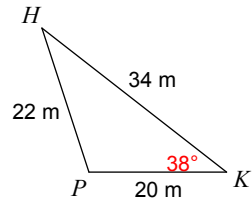
206) Find $m\angle A$



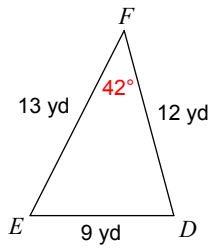
207) Find $m\angle D$



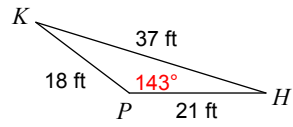
208) Find $m\angle K$



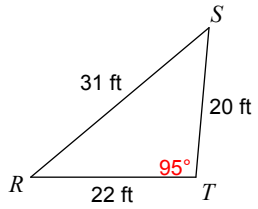
209) Find $m\angle F$



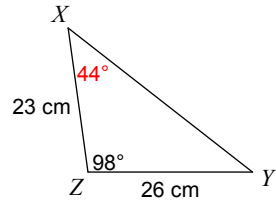
210) Find $m\angle P$



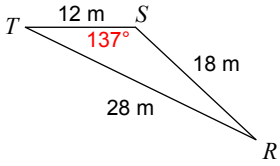
211) Find $m\angle T$



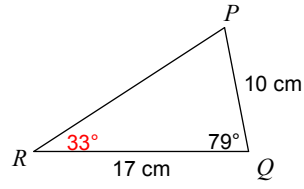
212) Find $m\angle X$



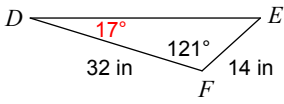
213) Find $m\angle S$



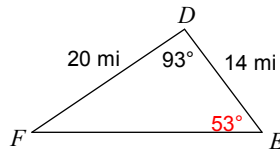
214) Find $m\angle R$



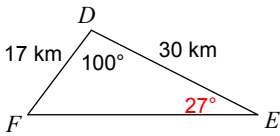
215) Find $m\angle D$



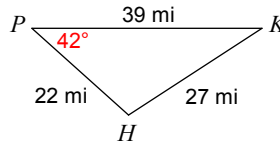
216) Find $m\angle E$



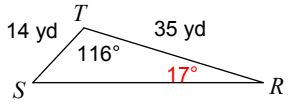
217) Find $m\angle E$



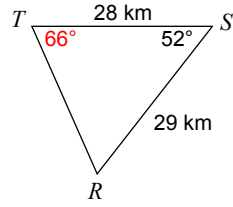
218) Find $m\angle P$



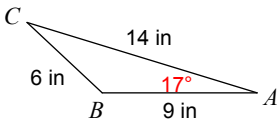
219) Find $m\angle R$



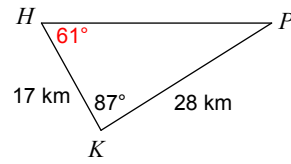
220) Find $m\angle T$



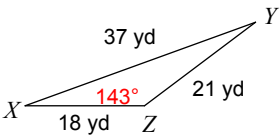
221) Find $m\angle A$



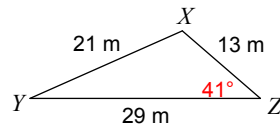
222) Find $m\angle H$



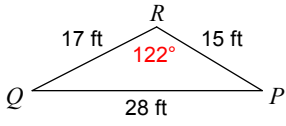
223) Find $m\angle Z$



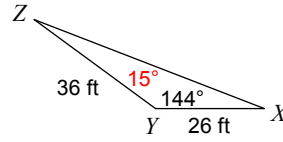
224) Find $m\angle Z$



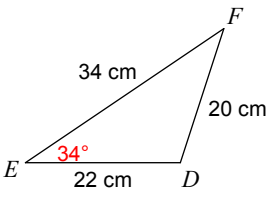
225) Find $m\angle R$



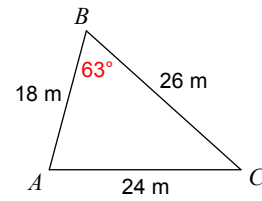
226) Find $m\angle Z$



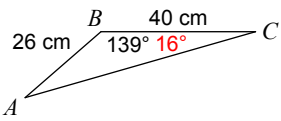
227) Find $m\angle E$



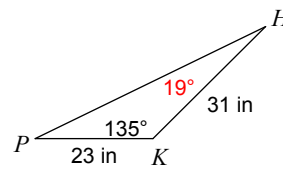
228) Find $m\angle B$



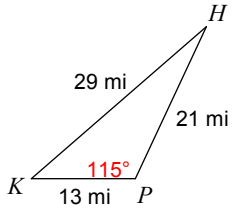
229) Find $m\angle C$



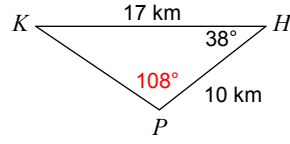
230) Find $m\angle H$



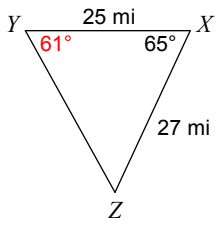
231) Find $m\angle P$



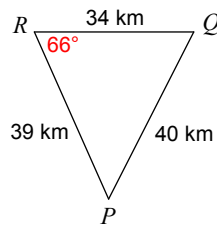
232) Find $m\angle P$



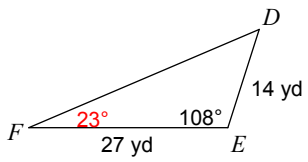
233) Find $m\angle Y$



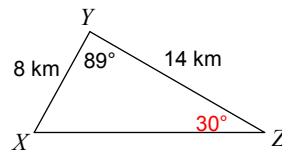
234) Find $m\angle R$



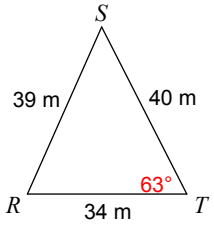
235) Find $m\angle F$



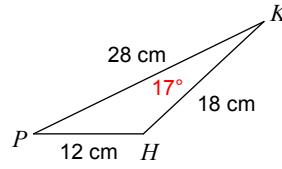
236) Find $m\angle Z$



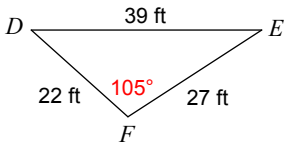
237) Find $m\angle T$



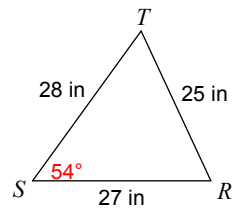
238) Find $m\angle K$



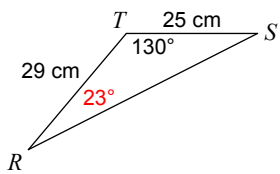
239) Find $m\angle F$



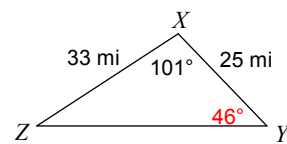
240) Find $m\angle S$



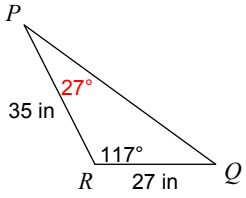
241) Find $m\angle R$



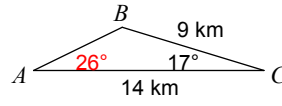
242) Find $m\angle Y$



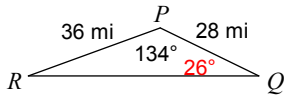
243) Find $m\angle P$



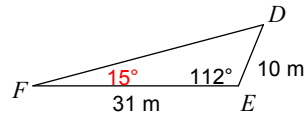
244) Find $m\angle A$



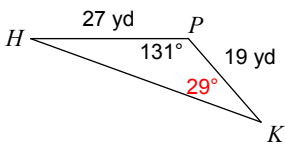
245) Find $m\angle Q$



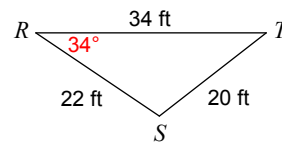
246) Find $m\angle F$



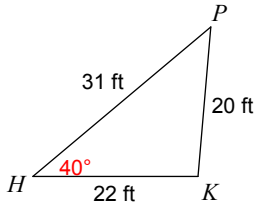
247) Find $m\angle K$



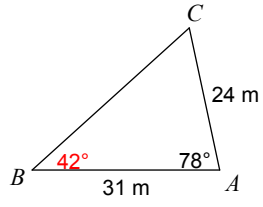
248) Find $m\angle R$



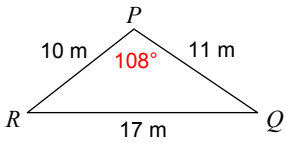
249) Find $m\angle H$



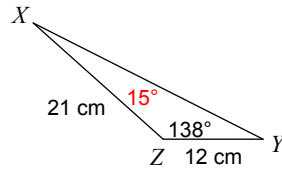
250) Find $m\angle B$



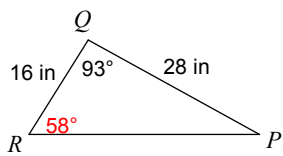
251) Find $m\angle P$



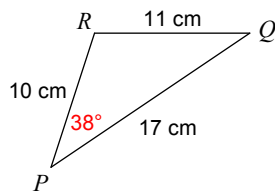
252) Find $m\angle X$



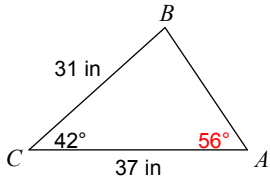
253) Find $m\angle R$



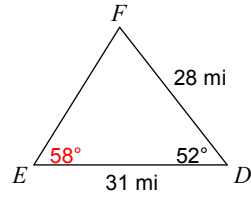
254) Find $m\angle P$



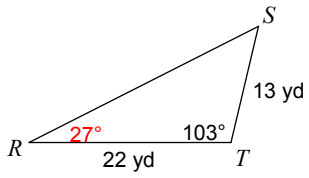
255) Find $m\angle A$



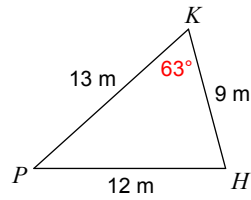
256) Find $m\angle E$



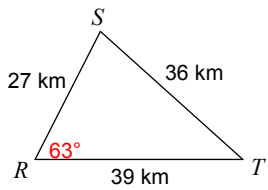
257) Find $m\angle R$



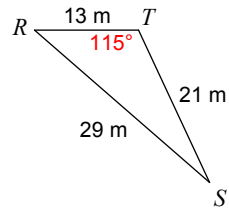
258) Find $m\angle K$



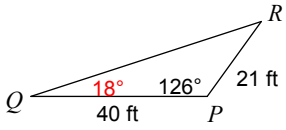
259) Find $m\angle R$



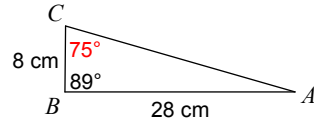
260) Find $m\angle T$



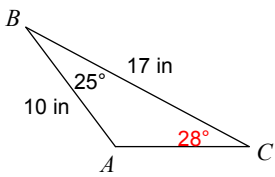
261) Find $m\angle Q$



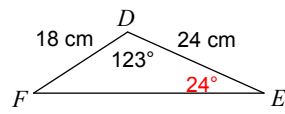
262) Find $m\angle C$



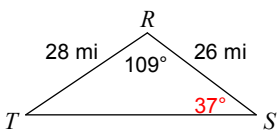
263) Find $m\angle C$



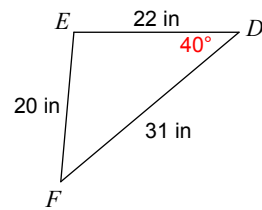
264) Find $m\angle E$



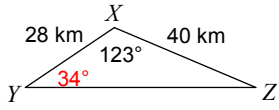
265) Find $m\angle S$



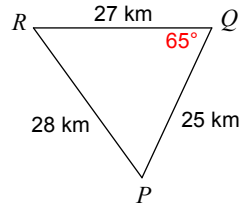
266) Find $m\angle D$



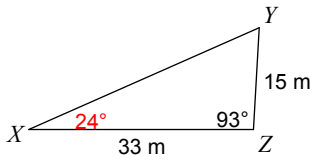
267) Find $m\angle Y$



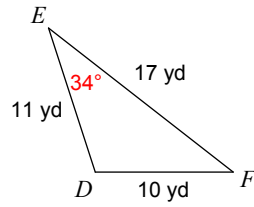
268) Find $m\angle Q$



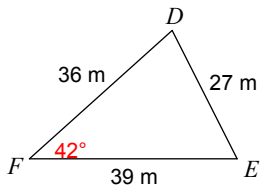
269) Find $m\angle X$



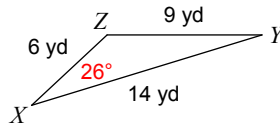
270) Find $m\angle E$



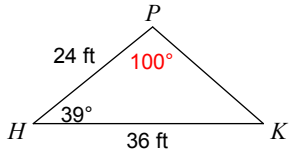
271) Find $m\angle F$



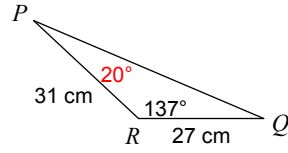
272) Find $m\angle X$



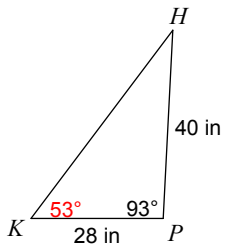
273) Find $m\angle P$



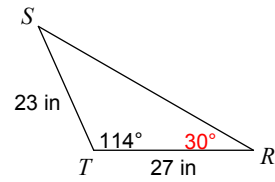
274) Find $m\angle P$



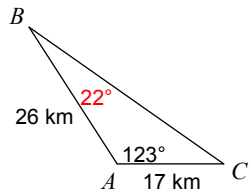
275) Find $m\angle K$



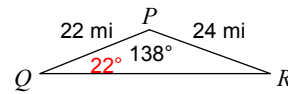
276) Find $m\angle R$



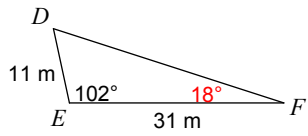
277) Find $m\angle B$



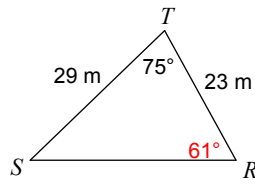
278) Find $m\angle Q$



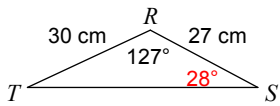
279) Find $m\angle F$



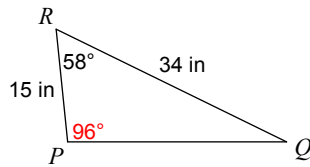
280) Find $m\angle R$



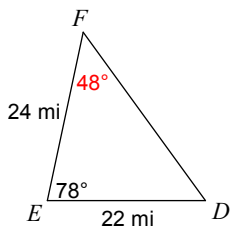
281) Find $m\angle S$



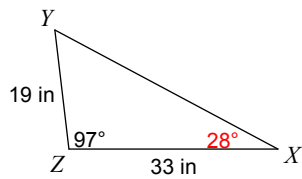
282) Find $m\angle P$



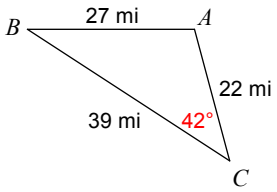
283) Find $m\angle F$



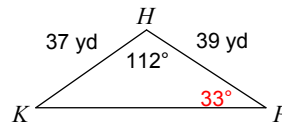
284) Find $m\angle X$



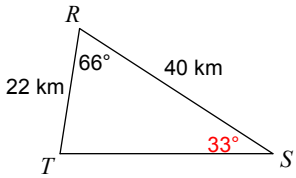
285) Find $m\angle C$



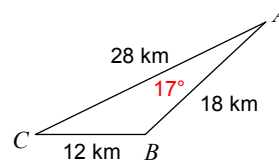
286) Find $m\angle P$



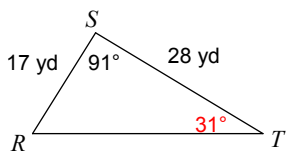
287) Find $m\angle S$



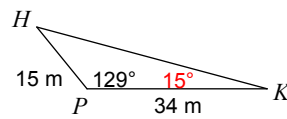
288) Find $m\angle A$



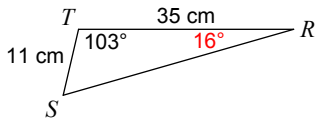
289) Find $m\angle T$



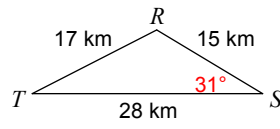
290) Find $m\angle K$



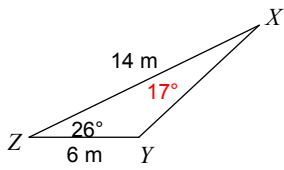
291) Find $m\angle R$



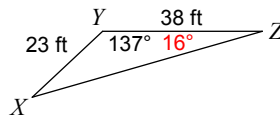
292) Find $m\angle S$



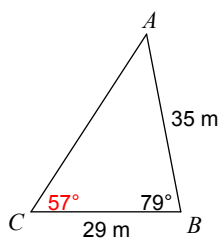
293) Find $m\angle X$



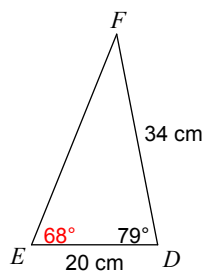
294) Find $m\angle Z$



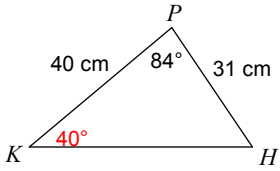
295) Find $m\angle C$



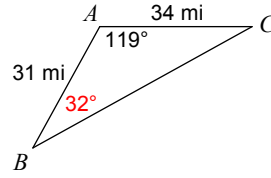
296) Find $m\angle E$



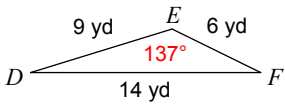
297) Find $m\angle K$



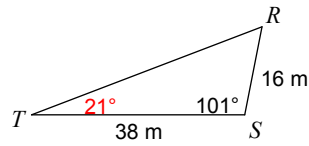
298) Find $m\angle B$



299) Find $m\angle E$

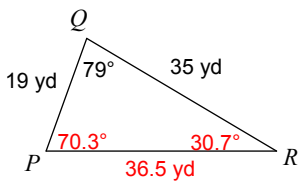


300) Find $m\angle T$

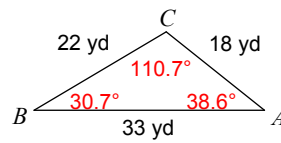


Find all missing measures of a triangle.

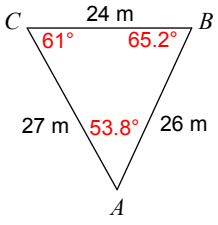
301)



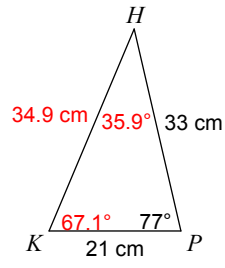
302)



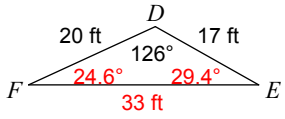
303)



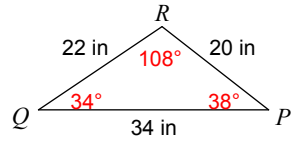
304)



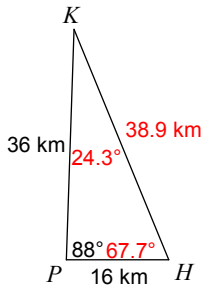
305)



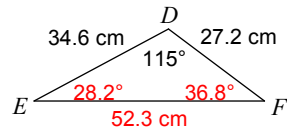
306)



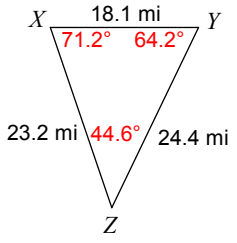
307)



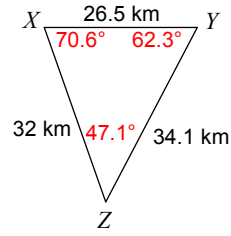
308)



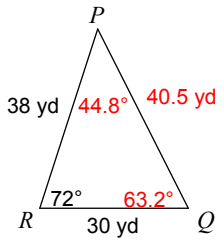
309)



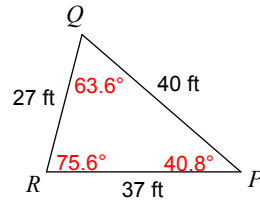
310)



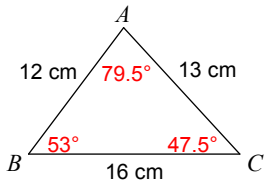
311)



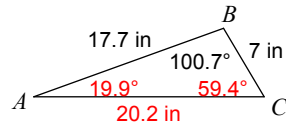
312)



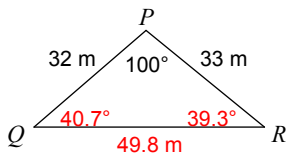
313)



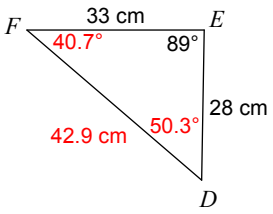
314)



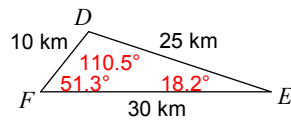
315)



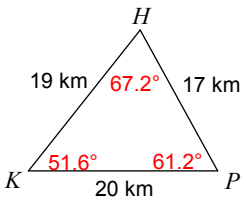
316)



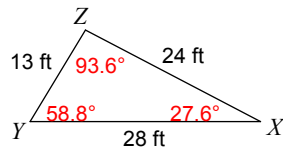
317)



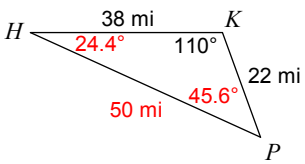
318)



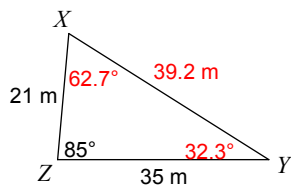
319)



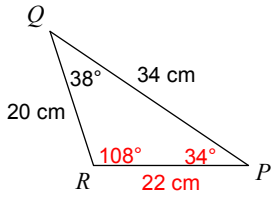
320)



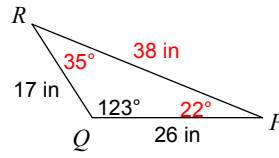
321)



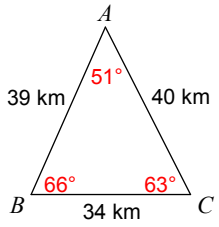
322)



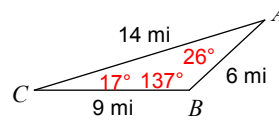
323)



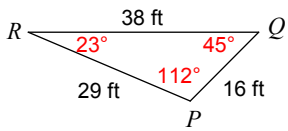
324)



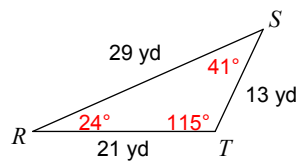
325)



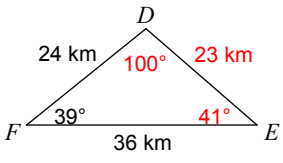
326)



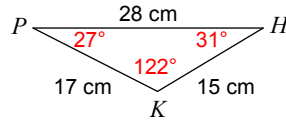
327)



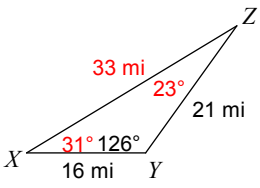
328)



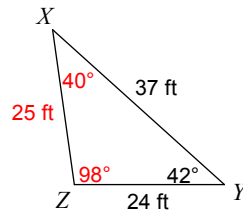
329)



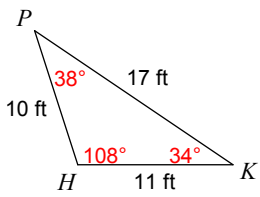
330)



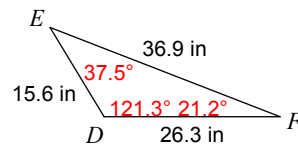
331)



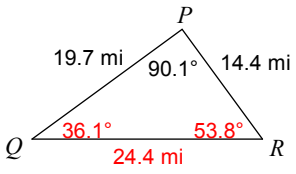
332)



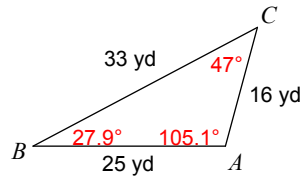
333)



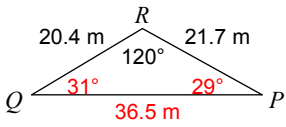
334)



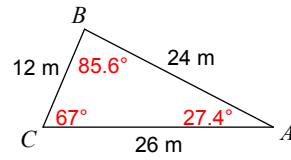
335)



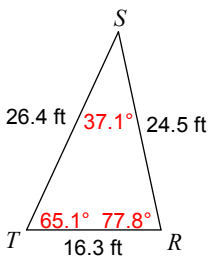
336)



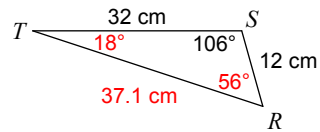
337)



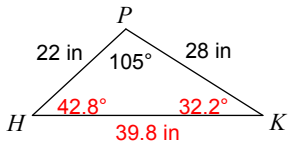
338)



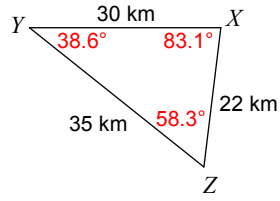
339)



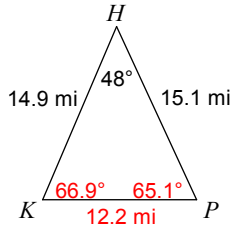
340)



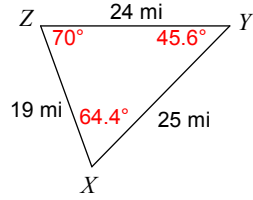
341)



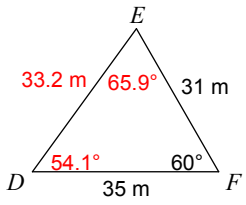
342)



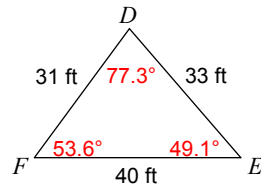
343)



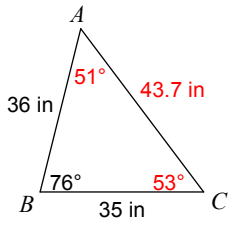
344)



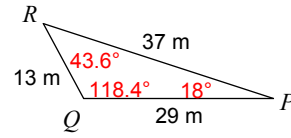
345)



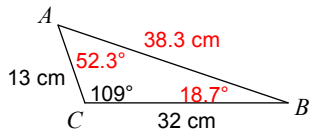
346)



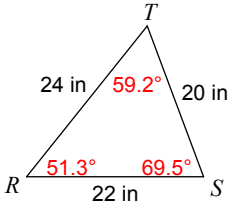
347)



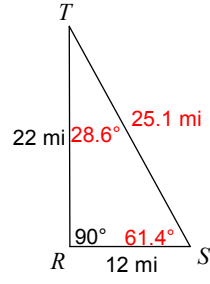
348)



349)



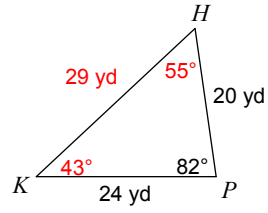
350)



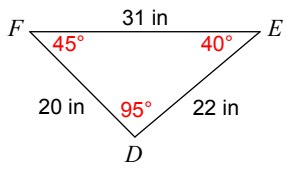
351)



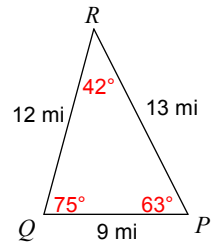
352)



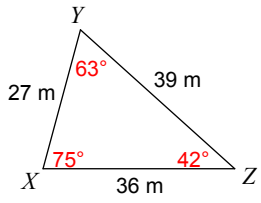
353)



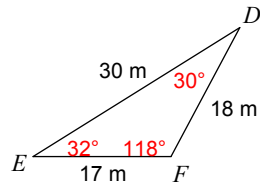
354)



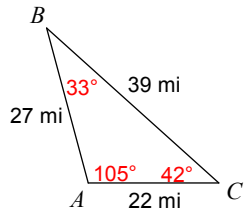
355)



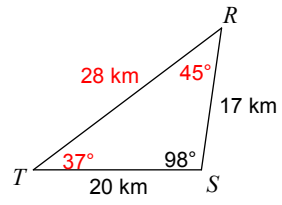
356)



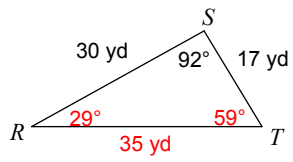
357)



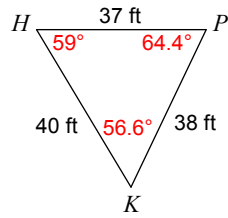
358)



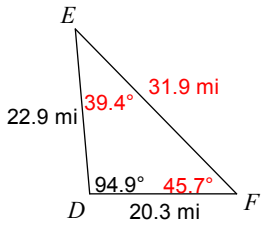
359)



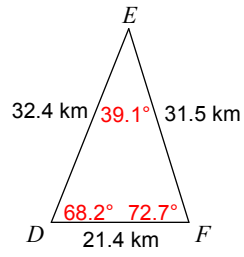
360)



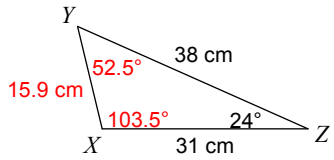
361)



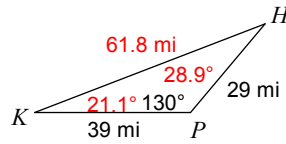
362)



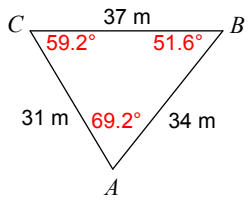
363)



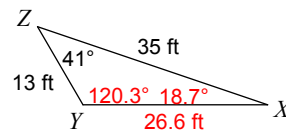
364)



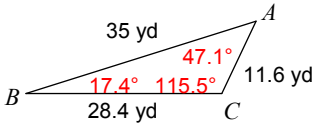
365)



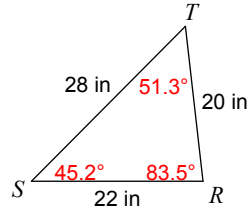
366)



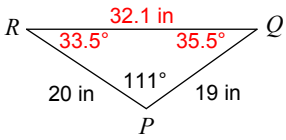
367)



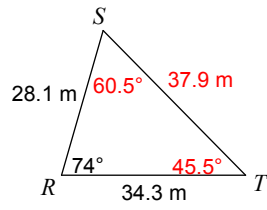
368)



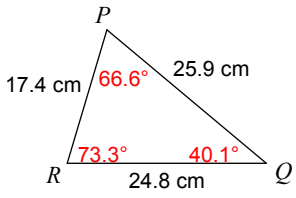
369)



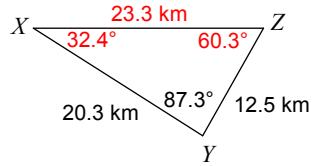
370)



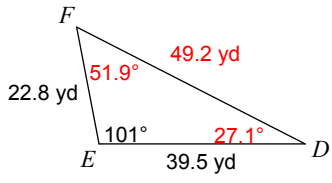
371)



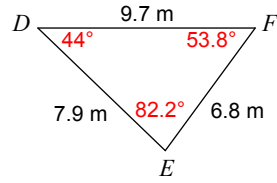
372)



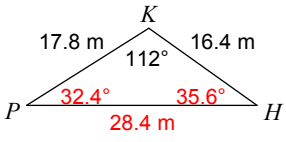
373)



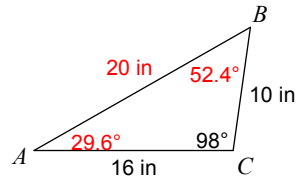
374)



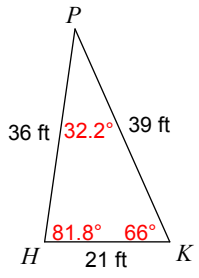
375)



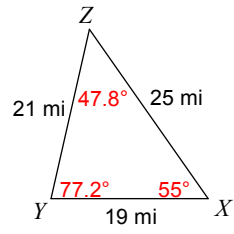
376)



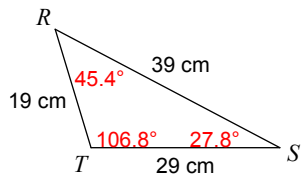
377)



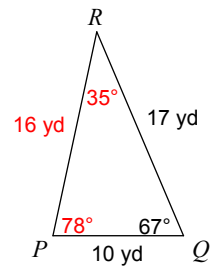
378)



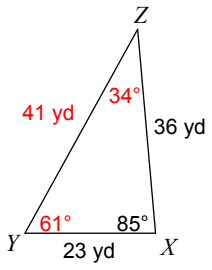
379)



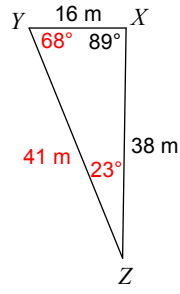
380)



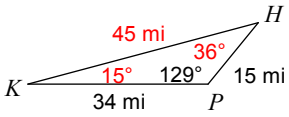
381)



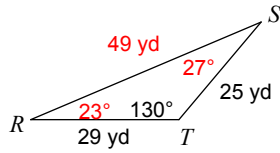
382)



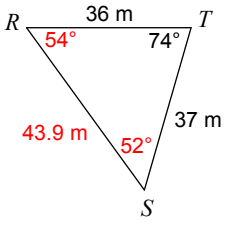
383)



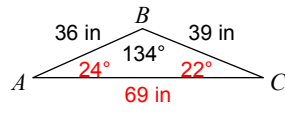
384)



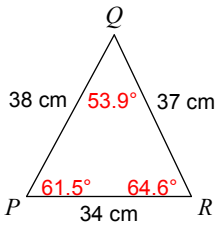
385)



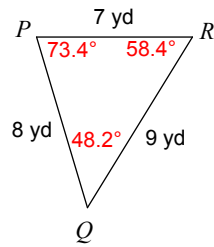
386)



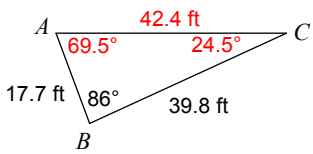
387)



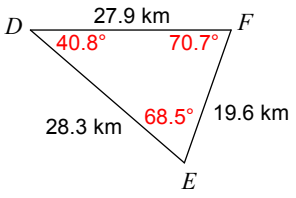
388)



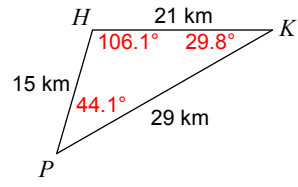
389)



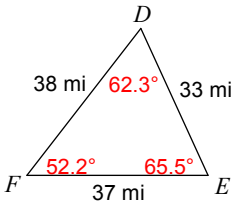
390)



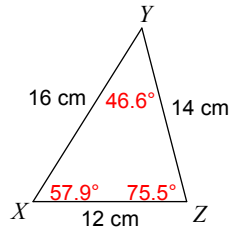
391)



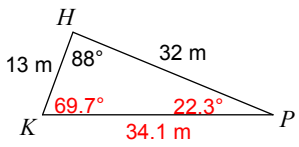
392)



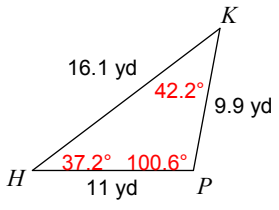
393)



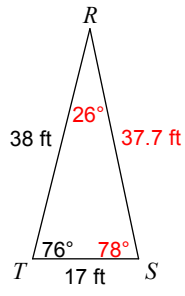
394)



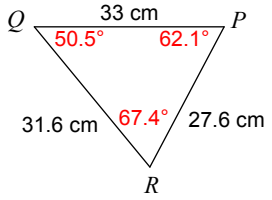
395)



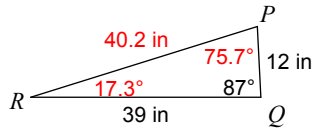
396)



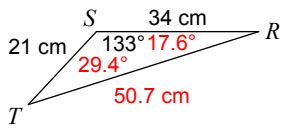
397)



398)



399)



400)

